


LABERINTO CON OPERACIONES

Encuentra la meta siguiendo los resultados correctos a cada una de las operaciones matemáticas; restas.



$\begin{array}{r} 11 \\ - 4 \\ \hline \end{array}$ 7 4	$\begin{array}{r} 10 \\ - 6 \\ \hline \end{array}$ 2 4	$\begin{array}{r} 7 \\ - 4 \\ \hline \end{array}$ 3 3	$\begin{array}{r} 5 \\ - 4 \\ \hline \end{array}$ 1 5	$\begin{array}{r} 7 \\ - 3 \\ \hline \end{array}$ 4
8	4	3	4	4
9	1	6	6	4
$\begin{array}{r} 13 \\ - 5 \\ \hline \end{array}$ 10 3	$\begin{array}{r} 8 \\ - 7 \\ \hline \end{array}$ 1 6	$\begin{array}{r} 10 \\ - 4 \\ \hline \end{array}$ 5 4	$\begin{array}{r} 12 \\ - 6 \\ \hline \end{array}$ 9 3	$\begin{array}{r} 2 \\ - 1 \\ \hline \end{array}$ 1
8	2	7	6	1
2	3	4	8	10
$\begin{array}{r} 9 \\ - 7 \\ \hline \end{array}$ 2 6	$\begin{array}{r} 14 \\ - 8 \\ \hline \end{array}$ 6 6	$\begin{array}{r} 8 \\ - 2 \\ \hline \end{array}$ 6 8	$\begin{array}{r} 10 \\ - 2 \\ \hline \end{array}$ 6 6	$\begin{array}{r} 8 \\ - 1 \\ \hline \end{array}$ 7
5	4	7	9	7
3	2	7	5	10
$\begin{array}{r} 11 \\ - 5 \\ \hline \end{array}$ 7 4	$\begin{array}{r} 5 \\ - 1 \\ \hline \end{array}$ 7 5	$\begin{array}{r} 13 \\ - 8 \\ \hline \end{array}$ 2 3	$\begin{array}{r} 11 \\ - 8 \\ \hline \end{array}$ 2 8	$\begin{array}{r} 12 \\ - 4 \\ \hline \end{array}$ 6
6	3	6	4	6
9	4	5	4	6
$\begin{array}{r} 11 \\ - 3 \\ \hline \end{array}$ 8 3	$\begin{array}{r} 8 \\ - 7 \\ \hline \end{array}$ 1 4	$\begin{array}{r} 7 \\ - 5 \\ \hline \end{array}$ 2 2	$\begin{array}{r} 5 \\ - 3 \\ \hline \end{array}$ 2 7	$\begin{array}{r} 9 \\ - 2 \\ \hline \end{array}$ 10
7	2	3	2	



LABERINTO CON OPERACIONES

Encuentra la meta siguiendo los resultados correctos a cada una de las operaciones matemáticas; restas.



$\begin{array}{r} 10 \\ - 3 \\ \hline \end{array}$	10 11	$\begin{array}{r} 10 \\ - 2 \\ \hline \end{array}$	8 3	$\begin{array}{r} 13 \\ - 8 \\ \hline \end{array}$	2 11	$\begin{array}{r} 10 \\ - 2 \\ \hline \end{array}$	8 10	$\begin{array}{r} 16 \\ - 8 \\ \hline \end{array}$
7		6		5		6		8
3		7		2		1		9
$\begin{array}{r} 8 \\ - 5 \\ \hline \end{array}$	3 5	$\begin{array}{r} 8 \\ - 3 \\ \hline \end{array}$	2 5	$\begin{array}{r} 10 \\ - 6 \\ \hline \end{array}$	4 4	$\begin{array}{r} 4 \\ - 3 \\ \hline \end{array}$	3 7	$\begin{array}{r} 11 \\ - 3 \\ \hline \end{array}$
4		5		7		2		8
6		8		10		6		5
$\begin{array}{r} 10 \\ - 7 \\ \hline \end{array}$	2 7	$\begin{array}{r} 11 \\ - 3 \\ \hline \end{array}$	8 7	$\begin{array}{r} 14 \\ - 7 \\ \hline \end{array}$	5 4	$\begin{array}{r} 10 \\ - 4 \\ \hline \end{array}$	3 6	$\begin{array}{r} 8 \\ - 5 \\ \hline \end{array}$
3		11		7		6		3
5		4		6		5		5
$\begin{array}{r} 13 \\ - 8 \\ \hline \end{array}$	4 6	$\begin{array}{r} 14 \\ - 7 \\ \hline \end{array}$	7 6	$\begin{array}{r} 7 \\ - 1 \\ \hline \end{array}$	9 2	$\begin{array}{r} 7 \\ - 2 \\ \hline \end{array}$	7 6	$\begin{array}{r} 6 \\ - 3 \\ \hline \end{array}$
5		7		4		8		3
5		8		5		7		5
$\begin{array}{r} 11 \\ - 6 \\ \hline \end{array}$	5 8	$\begin{array}{r} 9 \\ - 1 \\ \hline \end{array}$	8 3	$\begin{array}{r} 5 \\ - 2 \\ \hline \end{array}$	6 8	$\begin{array}{r} 11 \\ - 3 \\ \hline \end{array}$	11 4	$\begin{array}{r} 8 \\ - 4 \\ \hline \end{array}$
8		8		4		6		7



LABERINTO CON OPERACIONES

Encuentra la meta siguiendo los resultados correctos a cada una de las operaciones matemáticas; restas.



$\begin{array}{r} 6 \\ - 4 \\ \hline \end{array}$ 2 3	$\begin{array}{r} 6 \\ - 4 \\ \hline \end{array}$ 4 7	$\begin{array}{r} 13 \\ - 6 \\ \hline \end{array}$ 10 1	$\begin{array}{r} 4 \\ - 3 \\ \hline \end{array}$ 3 7	$\begin{array}{r} 10 \\ - 3 \\ \hline \end{array}$
3	2	8	2	5
4	6	2	2	11
$\begin{array}{r} 5 \\ - 3 \\ \hline \end{array}$ 5 8	$\begin{array}{r} 16 \\ - 8 \\ \hline \end{array}$ 10 5	$\begin{array}{r} 8 \\ - 6 \\ \hline \end{array}$ 3 3	$\begin{array}{r} 8 \\ - 7 \\ \hline \end{array}$ 1 8	$\begin{array}{r} 9 \\ - 1 \\ \hline \end{array}$
2	11	4	1	8
4	3	8	2	7
$\begin{array}{r} 11 \\ - 4 \\ \hline \end{array}$ 7 2	$\begin{array}{r} 9 \\ - 4 \\ \hline \end{array}$ 6 10	$\begin{array}{r} 8 \\ - 1 \\ \hline \end{array}$ 7 2	$\begin{array}{r} 7 \\ - 5 \\ \hline \end{array}$ 4 6	$\begin{array}{r} 9 \\ - 2 \\ \hline \end{array}$
10	5	7	5	7
2	6	6	2	4
$\begin{array}{r} 3 \\ - 1 \\ \hline \end{array}$ 5 5	$\begin{array}{r} 6 \\ - 3 \\ \hline \end{array}$ 4 9	$\begin{array}{r} 9 \\ - 3 \\ \hline \end{array}$ 5 4	$\begin{array}{r} 8 \\ - 5 \\ \hline \end{array}$ 5 6	$\begin{array}{r} 11 \\ - 7 \\ \hline \end{array}$
2	3	6	3	4
3	3	1	4	3
$\begin{array}{r} 11 \\ - 8 \\ \hline \end{array}$ 4 6	$\begin{array}{r} 12 \\ - 8 \\ \hline \end{array}$ 4 1	$\begin{array}{r} 8 \\ - 7 \\ \hline \end{array}$ 4 5	$\begin{array}{r} 12 \\ - 8 \\ \hline \end{array}$ 4 3	$\begin{array}{r} 11 \\ - 8 \\ \hline \end{array}$
6	7	1	6	6



LABERINTO CON OPERACIONES

Encuentra la meta siguiendo los resultados correctos a cada una de las operaciones matemáticas; restas.



$\begin{array}{r} 12 \\ - 7 \\ \hline \end{array}$	$\begin{array}{r} 8 \\ - 4 \\ \hline \end{array}$	$\begin{array}{r} 9 \\ - 5 \\ \hline \end{array}$	$\begin{array}{r} 11 \\ - 6 \\ \hline \end{array}$	$\begin{array}{r} 9 \\ - 5 \\ \hline \end{array}$
3 6	4 7	4 4	5 7	
5	3	3	8	4
6	8	5	4	4
$\begin{array}{r} 13 \\ - 7 \\ \hline \end{array}$	$\begin{array}{r} 13 \\ - 5 \\ \hline \end{array}$	$\begin{array}{r} 9 \\ - 1 \\ \hline \end{array}$	$\begin{array}{r} 10 \\ - 5 \\ \hline \end{array}$	$\begin{array}{r} 4 \\ - 1 \\ \hline \end{array}$
7 11	8 8	8 5	2 2	
6	7	9	8	3
4	4	3	5	4
$\begin{array}{r} 8 \\ - 4 \\ \hline \end{array}$	$\begin{array}{r} 8 \\ - 7 \\ \hline \end{array}$	$\begin{array}{r} 7 \\ - 1 \\ \hline \end{array}$	$\begin{array}{r} 14 \\ - 7 \\ \hline \end{array}$	$\begin{array}{r} 6 \\ - 5 \\ \hline \end{array}$
7 3	2 6	7 7	6 1	
4	1	8	10	2
2	5	5	3	2
$\begin{array}{r} 9 \\ - 7 \\ \hline \end{array}$	$\begin{array}{r} 11 \\ - 4 \\ \hline \end{array}$	$\begin{array}{r} 10 \\ - 3 \\ \hline \end{array}$	$\begin{array}{r} 6 \\ - 4 \\ \hline \end{array}$	$\begin{array}{r} 8 \\ - 3 \\ \hline \end{array}$
5 6	4 4	7 2	2 5	
2	7	9	5	5
8	4	2	4	4
$\begin{array}{r} 11 \\ - 3 \\ \hline \end{array}$	$\begin{array}{r} 8 \\ - 5 \\ \hline \end{array}$	$\begin{array}{r} 2 \\ - 1 \\ \hline \end{array}$	$\begin{array}{r} 5 \\ - 3 \\ \hline \end{array}$	$\begin{array}{r} 10 \\ - 6 \\ \hline \end{array}$
8 3	5 1	1 2	2 4	
8	6	3	5	2



LABERINTO CON OPERACIONES

Encuentra la meta siguiendo los resultados correctos a cada una de las operaciones matemáticas; restas.



$\begin{array}{r} 5 \\ -1 \\ \hline \end{array}$	$\begin{array}{r} 7 \\ -2 \\ \hline \end{array}$	$\begin{array}{r} 6 \\ -5 \\ \hline \end{array}$	$\begin{array}{r} 18 \\ -8 \\ \hline \end{array}$	$\begin{array}{r} 15 \\ -8 \\ \hline \end{array}$	$\begin{array}{r} 13 \\ -4 \\ \hline \end{array}$
5 3	4 1	4 10	10 7	7 9	
4	5	2	10	10	12
2	7	6	8	10	4
$\begin{array}{r} 12 \\ -10 \\ \hline \end{array}$	$\begin{array}{r} 17 \\ -8 \\ \hline \end{array}$	$\begin{array}{r} 13 \\ -8 \\ \hline \end{array}$	$\begin{array}{r} 13 \\ -5 \\ \hline \end{array}$	$\begin{array}{r} 19 \\ -10 \\ \hline \end{array}$	$\begin{array}{r} 11 \\ -10 \\ \hline \end{array}$
5 12	9 2	7 6	8 9	9 1	
2	6	5	7	8	1
7	9	11	2	7	9
$\begin{array}{r} 12 \\ -6 \\ \hline \end{array}$	$\begin{array}{r} 12 \\ -4 \\ \hline \end{array}$	$\begin{array}{r} 14 \\ -6 \\ \hline \end{array}$	$\begin{array}{r} 7 \\ -3 \\ \hline \end{array}$	$\begin{array}{r} 14 \\ -6 \\ \hline \end{array}$	$\begin{array}{r} 18 \\ -9 \\ \hline \end{array}$
4 8	7 8	5 7	4 8	10 10	
6	10	9	4	8	9
4	2	11	10	4	5
$\begin{array}{r} 10 \\ -9 \\ \hline \end{array}$	$\begin{array}{r} 12 \\ -7 \\ \hline \end{array}$	$\begin{array}{r} 18 \\ -9 \\ \hline \end{array}$	$\begin{array}{r} 17 \\ -7 \\ \hline \end{array}$	$\begin{array}{r} 11 \\ -7 \\ \hline \end{array}$	$\begin{array}{r} 8 \\ -3 \\ \hline \end{array}$
3 3	5 9	6 11	9 7	4 5	
1	6	9	10	2	7
8	7	5	4	8	7
$\begin{array}{r} 8 \\ -2 \\ \hline \end{array}$	$\begin{array}{r} 12 \\ -2 \\ \hline \end{array}$	$\begin{array}{r} 13 \\ -8 \\ \hline \end{array}$	$\begin{array}{r} 11 \\ -7 \\ \hline \end{array}$	$\begin{array}{r} 8 \\ -2 \\ \hline \end{array}$	$\begin{array}{r} 14 \\ -4 \\ \hline \end{array}$
6 13	9 8	3 2	4 6	6 10	
5	10	5	6	3	10
6	9	6	7	5	10
$\begin{array}{r} 11 \\ -2 \\ \hline \end{array}$	$\begin{array}{r} 11 \\ -1 \\ \hline \end{array}$	$\begin{array}{r} 10 \\ -4 \\ \hline \end{array}$	$\begin{array}{r} 13 \\ -9 \\ \hline \end{array}$	$\begin{array}{r} 13 \\ -6 \\ \hline \end{array}$	$\begin{array}{r} 17 \\ -7 \\ \hline \end{array}$
9 8	10 6	6 4	5 8	7 10	
8	13	6	6	6	11



LABERINTO CON OPERACIONES

Encuentra la meta siguiendo los resultados correctos a cada una de las operaciones matemáticas; restas.



$\begin{array}{r} 11 \\ - 4 \\ \hline \end{array}$ <p>7 6</p>	$\begin{array}{r} 11 \\ - 4 \\ \hline \end{array}$ <p>5 3</p>	$\begin{array}{r} 7 \\ - 4 \\ \hline \end{array}$ <p>2 4</p>	$\begin{array}{r} 9 \\ - 5 \\ \hline \end{array}$ <p>6 4</p>	$\begin{array}{r} 6 \\ - 4 \\ \hline \end{array}$
9	7	6	5	2
3	8	7	8	1
$\begin{array}{r} 5 \\ - 3 \\ \hline \end{array}$ <p>5 5</p>	$\begin{array}{r} 8 \\ - 3 \\ \hline \end{array}$ <p>4 3</p>	$\begin{array}{r} 8 \\ - 3 \\ \hline \end{array}$ <p>4 6</p>	$\begin{array}{r} 9 \\ - 1 \\ \hline \end{array}$ <p>8 1</p>	$\begin{array}{r} 9 \\ - 8 \\ \hline \end{array}$
2	2	5	9	1
4	7	4	10	7
$\begin{array}{r} 5 \\ - 3 \\ \hline \end{array}$ <p>5 9</p>	$\begin{array}{r} 16 \\ - 8 \\ \hline \end{array}$ <p>8 4</p>	$\begin{array}{r} 8 \\ - 4 \\ \hline \end{array}$ <p>4 7</p>	$\begin{array}{r} 8 \\ - 1 \\ \hline \end{array}$ <p>7 7</p>	$\begin{array}{r} 8 \\ - 1 \\ \hline \end{array}$
2	8	3	9	7
5	4	4	2	8
$\begin{array}{r} 12 \\ - 5 \\ \hline \end{array}$ <p>6 6</p>	$\begin{array}{r} 7 \\ - 3 \\ \hline \end{array}$ <p>5 8</p>	$\begin{array}{r} 9 \\ - 3 \\ \hline \end{array}$ <p>6 4</p>	$\begin{array}{r} 9 \\ - 5 \\ \hline \end{array}$ <p>5 10</p>	$\begin{array}{r} 9 \\ - 1 \\ \hline \end{array}$
7	7	3	4	8
9	3	7	6	4
$\begin{array}{r} 12 \\ - 6 \\ \hline \end{array}$ <p>6 4</p>	$\begin{array}{r} 9 \\ - 4 \\ \hline \end{array}$ <p>5 4</p>	$\begin{array}{r} 12 \\ - 8 \\ \hline \end{array}$ <p>4 6</p>	$\begin{array}{r} 9 \\ - 3 \\ \hline \end{array}$ <p>8 6</p>	$\begin{array}{r} 5 \\ - 1 \\ \hline \end{array}$
4	6	4	4	3



LABERINTO CON OPERACIONES

Encuentra la meta siguiendo los resultados correctos a cada una de las operaciones matemáticas; restas.



$\begin{array}{r} 15 \\ - 8 \\ \hline \end{array}$ <p>9 4</p>	$\begin{array}{r} 8 \\ - 2 \\ \hline \end{array}$ <p>3 7</p>	$\begin{array}{r} 13 \\ - 5 \\ \hline \end{array}$ <p>8 5</p>	$\begin{array}{r} 10 \\ - 7 \\ \hline \end{array}$ <p>3 8</p>	$\begin{array}{r} 7 \\ - 2 \\ \hline \end{array}$
7	6	9	2	5
8	2	6	4	9
$\begin{array}{r} 10 \\ - 2 \\ \hline \end{array}$ <p>6 4</p>	$\begin{array}{r} 9 \\ - 7 \\ \hline \end{array}$ <p>3 11</p>	$\begin{array}{r} 10 \\ - 2 \\ \hline \end{array}$ <p>10 2</p>	$\begin{array}{r} 7 \\ - 5 \\ \hline \end{array}$ <p>5 8</p>	$\begin{array}{r} 14 \\ - 8 \\ \hline \end{array}$
8	2	8	3	6
3	5	7	2	7
$\begin{array}{r} 5 \\ - 2 \\ \hline \end{array}$ <p>6 3</p>	$\begin{array}{r} 6 \\ - 1 \\ \hline \end{array}$ <p>4 2</p>	$\begin{array}{r} 8 \\ - 3 \\ \hline \end{array}$ <p>6 4</p>	$\begin{array}{r} 3 \\ - 1 \\ \hline \end{array}$ <p>3 4</p>	$\begin{array}{r} 9 \\ - 4 \\ \hline \end{array}$
3	5	5	5	5
8	6	11	3	8
$\begin{array}{r} 11 \\ - 3 \\ \hline \end{array}$ <p>7 8</p>	$\begin{array}{r} 10 \\ - 4 \\ \hline \end{array}$ <p>4 10</p>	$\begin{array}{r} 12 \\ - 4 \\ \hline \end{array}$ <p>9 6</p>	$\begin{array}{r} 9 \\ - 6 \\ \hline \end{array}$ <p>2 7</p>	$\begin{array}{r} 12 \\ - 5 \\ \hline \end{array}$
8	6	8	5	10
1	2	5	4	8
$\begin{array}{r} 4 \\ - 3 \\ \hline \end{array}$ <p>1 2</p>	$\begin{array}{r} 4 \\ - 2 \\ \hline \end{array}$ <p>2 6</p>	$\begin{array}{r} 12 \\ - 6 \\ \hline \end{array}$ <p>4 6</p>	$\begin{array}{r} 11 \\ - 4 \\ \hline \end{array}$ <p>7 8</p>	$\begin{array}{r} 9 \\ - 1 \\ \hline \end{array}$
2	2	9	5	7



LABERINTO CON OPERACIONES

Encuentra la meta siguiendo los resultados correctos a cada una de las operaciones matemáticas; restas.



$\begin{array}{r} 11 \\ - 8 \\ \hline \end{array}$ <p>4 8</p>	$\begin{array}{r} 11 \\ - 3 \\ \hline \end{array}$ <p>9 6</p>	$\begin{array}{r} 10 \\ - 4 \\ \hline \end{array}$ <p>6 7</p>	$\begin{array}{r} 11 \\ - 4 \\ \hline \end{array}$ <p>5 6</p>	$\begin{array}{r} 11 \\ - 8 \\ \hline \end{array}$
3	11	4	7	3
2	5	4	5	6
$\begin{array}{r} 9 \\ - 6 \\ \hline \end{array}$ <p>3 6</p>	$\begin{array}{r} 8 \\ - 4 \\ \hline \end{array}$ <p>7 5</p>	$\begin{array}{r} 9 \\ - 7 \\ \hline \end{array}$ <p>2 5</p>	$\begin{array}{r} 13 \\ - 8 \\ \hline \end{array}$ <p>7 3</p>	$\begin{array}{r} 13 \\ - 7 \\ \hline \end{array}$
5	4	2	2	6
4	7	8	5	6
$\begin{array}{r} 10 \\ - 5 \\ \hline \end{array}$ <p>6 8</p>	$\begin{array}{r} 11 \\ - 3 \\ \hline \end{array}$ <p>10 10</p>	$\begin{array}{r} 13 \\ - 5 \\ \hline \end{array}$ <p>6 4</p>	$\begin{array}{r} 3 \\ - 1 \\ \hline \end{array}$ <p>2 6</p>	$\begin{array}{r} 11 \\ - 5 \\ \hline \end{array}$
5	11	8	2	6
2	4	7	3	8
$\begin{array}{r} 8 \\ - 4 \\ \hline \end{array}$ <p>6 3</p>	$\begin{array}{r} 5 \\ - 3 \\ \hline \end{array}$ <p>5 10</p>	$\begin{array}{r} 14 \\ - 7 \\ \hline \end{array}$ <p>4 5</p>	$\begin{array}{r} 6 \\ - 3 \\ \hline \end{array}$ <p>4 7</p>	$\begin{array}{r} 12 \\ - 4 \\ \hline \end{array}$
4	2	6	3	8
5	2	11	1	8
$\begin{array}{r} 6 \\ - 3 \\ \hline \end{array}$ <p>3 2</p>	$\begin{array}{r} 7 \\ - 5 \\ \hline \end{array}$ <p>2 8</p>	$\begin{array}{r} 9 \\ - 1 \\ \hline \end{array}$ <p>8 1</p>	$\begin{array}{r} 9 \\ - 8 \\ \hline \end{array}$ <p>3 10</p>	$\begin{array}{r} 14 \\ - 6 \\ \hline \end{array}$
6	2	7	2	5




LABERINTO CON OPERACIONES

Encuentra la meta siguiendo los resultados correctos a cada una de las operaciones matemáticas; restas.



$\begin{array}{r} 9 \\ - 2 \\ \hline \end{array}$ <p>7 5</p>	$\begin{array}{r} 13 \\ - 8 \\ \hline \end{array}$ <p>5 5</p>	$\begin{array}{r} 11 \\ - 5 \\ \hline \end{array}$ <p>9 8</p>	$\begin{array}{r} 10 \\ - 2 \\ \hline \end{array}$ <p>5 3</p>	$\begin{array}{r} 7 \\ - 4 \\ \hline \end{array}$
7	4	6	9	3
8	8	5	3	7
$\begin{array}{r} 13 \\ - 5 \\ \hline \end{array}$ <p>9 7</p>	$\begin{array}{r} 11 \\ - 6 \\ \hline \end{array}$ <p>4 3</p>	$\begin{array}{r} 4 \\ - 2 \\ \hline \end{array}$ <p>4 7</p>	$\begin{array}{r} 5 \\ - 1 \\ \hline \end{array}$ <p>4 7</p>	$\begin{array}{r} 8 \\ - 1 \\ \hline \end{array}$
8	5	2	6	4
7	8	5	9	4
$\begin{array}{r} 15 \\ - 8 \\ \hline \end{array}$ <p>7 8</p>	$\begin{array}{r} 10 \\ - 2 \\ \hline \end{array}$ <p>11 8</p>	$\begin{array}{r} 13 \\ - 7 \\ \hline \end{array}$ <p>6 10</p>	$\begin{array}{r} 15 \\ - 7 \\ \hline \end{array}$ <p>8 2</p>	$\begin{array}{r} 3 \\ - 2 \\ \hline \end{array}$
7	10	4	7	1
5	5	5	8	4
$\begin{array}{r} 11 \\ - 6 \\ \hline \end{array}$ <p>2 9</p>	$\begin{array}{r} 8 \\ - 2 \\ \hline \end{array}$ <p>6 3</p>	$\begin{array}{r} 9 \\ - 6 \\ \hline \end{array}$ <p>3 5</p>	$\begin{array}{r} 9 \\ - 4 \\ \hline \end{array}$ <p>6 5</p>	$\begin{array}{r} 10 \\ - 8 \\ \hline \end{array}$
5	6	2	5	2
6	6	4	4	6
$\begin{array}{r} 9 \\ - 3 \\ \hline \end{array}$ <p>4 8</p>	$\begin{array}{r} 14 \\ - 8 \\ \hline \end{array}$ <p>5 2</p>	$\begin{array}{r} 9 \\ - 6 \\ \hline \end{array}$ <p>3 3</p>	$\begin{array}{r} 6 \\ - 3 \\ \hline \end{array}$ <p>2 3</p>	$\begin{array}{r} 11 \\ - 8 \\ \hline \end{array}$
5	9	3	5	5




LABERINTO CON OPERACIONES

Encuentra la meta siguiendo los resultados correctos a cada una de las operaciones matemáticas; restas.



$\begin{array}{r} 13 \\ - 6 \\ \hline \end{array}$ <p>7 4</p>	$\begin{array}{r} 4 \\ - 2 \\ \hline \end{array}$ <p>2 4</p>	$\begin{array}{r} 9 \\ - 3 \\ \hline \end{array}$ <p>6 5</p>	$\begin{array}{r} 7 \\ - 1 \\ \hline \end{array}$ <p>6 3</p>	$\begin{array}{r} 5 \\ - 1 \\ \hline \end{array}$
6	3	7	9	4
5	2	4	2	9
$\begin{array}{r} 4 \\ - 2 \\ \hline \end{array}$ <p>2 3</p>	$\begin{array}{r} 7 \\ - 4 \\ \hline \end{array}$ <p>5 5</p>	$\begin{array}{r} 9 \\ - 5 \\ \hline \end{array}$ <p>4 3</p>	$\begin{array}{r} 10 \\ - 7 \\ \hline \end{array}$ <p>4 6</p>	$\begin{array}{r} 16 \\ - 8 \\ \hline \end{array}$
2	3	3	6	8
4	8	3	4	4
$\begin{array}{r} 7 \\ - 3 \\ \hline \end{array}$ <p>2 6</p>	$\begin{array}{r} 15 \\ - 7 \\ \hline \end{array}$ <p>8 4</p>	$\begin{array}{r} 11 \\ - 7 \\ \hline \end{array}$ <p>4 1</p>	$\begin{array}{r} 6 \\ - 5 \\ \hline \end{array}$ <p>1 3</p>	$\begin{array}{r} 6 \\ - 5 \\ \hline \end{array}$
4	9	6	3	1
4	6	4	4	5
$\begin{array}{r} 10 \\ - 6 \\ \hline \end{array}$ <p>3 10</p>	$\begin{array}{r} 16 \\ - 8 \\ \hline \end{array}$ <p>8 7</p>	$\begin{array}{r} 9 \\ - 2 \\ \hline \end{array}$ <p>7 1</p>	$\begin{array}{r} 9 \\ - 8 \\ \hline \end{array}$ <p>2 3</p>	$\begin{array}{r} 7 \\ - 3 \\ \hline \end{array}$
4	8	10	3	4
6	7	2	7	5
$\begin{array}{r} 13 \\ - 7 \\ \hline \end{array}$ <p>5 6</p>	$\begin{array}{r} 8 \\ - 1 \\ \hline \end{array}$ <p>7 1</p>	$\begin{array}{r} 5 \\ - 4 \\ \hline \end{array}$ <p>1 8</p>	$\begin{array}{r} 10 \\ - 2 \\ \hline \end{array}$ <p>11 2</p>	$\begin{array}{r} 3 \\ - 1 \\ \hline \end{array}$
9	5	1	5	3




LABERINTO CON OPERACIONES

Encuentra la meta siguiendo los resultados correctos a cada una de las operaciones matemáticas; restas.



$\begin{array}{r} 9 \\ - 2 \\ \hline \end{array}$	$\begin{array}{r} 5 \\ - 4 \\ \hline \end{array}$	$\begin{array}{r} 2 \\ - 1 \\ \hline \end{array}$	$\begin{array}{r} 3 \\ - 2 \\ \hline \end{array}$	$\begin{array}{r} 13 \\ - 7 \\ \hline \end{array}$
7 1	2 2	4 1	2 5	
5	1	1	4	6
3	4	3	7	7
$\begin{array}{r} 12 \\ - 8 \\ \hline \end{array}$	$\begin{array}{r} 9 \\ - 5 \\ \hline \end{array}$	$\begin{array}{r} 8 \\ - 4 \\ \hline \end{array}$	$\begin{array}{r} 10 \\ - 6 \\ \hline \end{array}$	$\begin{array}{r} 12 \\ - 5 \\ \hline \end{array}$
4 4	3 2	7 3	4 7	
4	2	4	4	5
2	6	9	4	2
$\begin{array}{r} 7 \\ - 5 \\ \hline \end{array}$	$\begin{array}{r} 8 \\ - 5 \\ \hline \end{array}$	$\begin{array}{r} 13 \\ - 6 \\ \hline \end{array}$	$\begin{array}{r} 12 \\ - 8 \\ \hline \end{array}$	$\begin{array}{r} 7 \\ - 3 \\ \hline \end{array}$
2 3	4 10	5 2	4 4	
3	3	7	5	4
2	5	9	2	4
$\begin{array}{r} 4 \\ - 1 \\ \hline \end{array}$	$\begin{array}{r} 6 \\ - 1 \\ \hline \end{array}$	$\begin{array}{r} 12 \\ - 4 \\ \hline \end{array}$	$\begin{array}{r} 12 \\ - 8 \\ \hline \end{array}$	$\begin{array}{r} 7 \\ - 1 \\ \hline \end{array}$
3 5	4 11	8 7	4 7	
3	8	10	5	6
7	5	5	9	3
$\begin{array}{r} 14 \\ - 7 \\ \hline \end{array}$	$\begin{array}{r} 10 \\ - 8 \\ \hline \end{array}$	$\begin{array}{r} 12 \\ - 6 \\ \hline \end{array}$	$\begin{array}{r} 16 \\ - 8 \\ \hline \end{array}$	$\begin{array}{r} 4 \\ - 2 \\ \hline \end{array}$
7 2	4 6	8 8	7 2	
7	3	3	10	4



LABERINTO CON OPERACIONES

Encuentra la meta siguiendo los resultados correctos a cada una de las operaciones matemáticas; restas.



$\begin{array}{r} 5 \\ - 3 \\ \hline \end{array}$	2 2	$\begin{array}{r} 5 \\ - 3 \\ \hline \end{array}$	2 5	$\begin{array}{r} 9 \\ - 4 \\ \hline \end{array}$	2 3	$\begin{array}{r} 3 \\ - 1 \\ \hline \end{array}$	2 7	$\begin{array}{r} 13 \\ - 7 \\ \hline \end{array}$
4		2		5		5		6
2		1		7		2		6
$\begin{array}{r} 4 \\ - 3 \\ \hline \end{array}$	1 1	$\begin{array}{r} 5 \\ - 4 \\ \hline \end{array}$	2 6	$\begin{array}{r} 15 \\ - 8 \\ \hline \end{array}$	4 5	$\begin{array}{r} 7 \\ - 5 \\ \hline \end{array}$	4 7	$\begin{array}{r} 14 \\ - 6 \\ \hline \end{array}$
4		3		7		3		8
3		5		8		6		4
$\begin{array}{r} 4 \\ - 2 \\ \hline \end{array}$	2 2	$\begin{array}{r} 7 \\ - 5 \\ \hline \end{array}$	4 6	$\begin{array}{r} 9 \\ - 1 \\ \hline \end{array}$	8 8	$\begin{array}{r} 11 \\ - 3 \\ \hline \end{array}$	8 5	$\begin{array}{r} 6 \\ - 4 \\ \hline \end{array}$
5		2		10		7		2
4		6		3		7		3
$\begin{array}{r} 2 \\ - 1 \\ \hline \end{array}$	1 6	$\begin{array}{r} 7 \\ - 1 \\ \hline \end{array}$	6 4	$\begin{array}{r} 7 \\ - 3 \\ \hline \end{array}$	4 8	$\begin{array}{r} 13 \\ - 5 \\ \hline \end{array}$	11 4	$\begin{array}{r} 4 \\ - 2 \\ \hline \end{array}$
1		7		5		10		2
2		2		11		4		3
$\begin{array}{r} 10 \\ - 8 \\ \hline \end{array}$	2 4	$\begin{array}{r} 6 \\ - 2 \\ \hline \end{array}$	4 8	$\begin{array}{r} 16 \\ - 8 \\ \hline \end{array}$	8 7	$\begin{array}{r} 8 \\ - 1 \\ \hline \end{array}$	9 1	$\begin{array}{r} 2 \\ - 1 \\ \hline \end{array}$
3		6		8		6		4



LABERINTO CON OPERACIONES

Encuentra la meta siguiendo los resultados correctos a cada una de las operaciones matemáticas; restas.



$\begin{array}{r} 10 \\ - 8 \\ \hline \end{array}$ 4 4 2 4	$\begin{array}{r} 7 \\ - 3 \\ \hline \end{array}$ 2 2 5 4	$\begin{array}{r} 9 \\ - 7 \\ \hline \end{array}$ 5 9 2 2	$\begin{array}{r} 11 \\ - 5 \\ \hline \end{array}$ 6 5 3 10	$\begin{array}{r} 8 \\ - 3 \\ \hline \end{array}$ 5 5
$\begin{array}{r} 11 \\ - 8 \\ \hline \end{array}$ 6 6 3 7	$\begin{array}{r} 9 \\ - 6 \\ \hline \end{array}$ 3 2 2 3	$\begin{array}{r} 6 \\ - 4 \\ \hline \end{array}$ 2 7 3 3	$\begin{array}{r} 14 \\ - 7 \\ \hline \end{array}$ 7 5 6 2	$\begin{array}{r} 10 \\ - 5 \\ \hline \end{array}$ 5 5
$\begin{array}{r} 12 \\ - 7 \\ \hline \end{array}$ 5 5 2 1	$\begin{array}{r} 7 \\ - 3 \\ \hline \end{array}$ 4 4 6 7	$\begin{array}{r} 11 \\ - 6 \\ \hline \end{array}$ 7 6 5 5	$\begin{array}{r} 8 \\ - 3 \\ \hline \end{array}$ 4 3 5 1	$\begin{array}{r} 6 \\ - 1 \\ \hline \end{array}$ 5 8
$\begin{array}{r} 5 \\ - 4 \\ \hline \end{array}$ 2 10 1 3	$\begin{array}{r} 16 \\ - 8 \\ \hline \end{array}$ 11 3 8 7	$\begin{array}{r} 4 \\ - 1 \\ \hline \end{array}$ 2 2 4 6	$\begin{array}{r} 5 \\ - 4 \\ \hline \end{array}$ 1 8 3 5	$\begin{array}{r} 15 \\ - 7 \\ \hline \end{array}$ 8 1
$\begin{array}{r} 10 \\ - 7 \\ \hline \end{array}$ 4 5 6	$\begin{array}{r} 14 \\ - 7 \\ \hline \end{array}$ 7 7 7	$\begin{array}{r} 14 \\ - 7 \\ \hline \end{array}$ 7 2 9	$\begin{array}{r} 4 \\ - 2 \\ \hline \end{array}$ 3 3 4	$\begin{array}{r} 4 \\ - 3 \\ \hline \end{array}$ 2




LABERINTO CON OPERACIONES

Encuentra la meta siguiendo los resultados correctos a cada una de las operaciones matemáticas; restas.



$\begin{array}{r} 13 \\ - 6 \\ \hline \end{array}$ 10 7	$\begin{array}{r} 12 \\ - 4 \\ \hline \end{array}$ 8 4	$\begin{array}{r} 6 \\ - 2 \\ \hline \end{array}$ 7 2	$\begin{array}{r} 4 \\ - 3 \\ \hline \end{array}$ 3 3	$\begin{array}{r} 7 \\ - 4 \\ \hline \end{array}$
7	8	4	1	3
2	6	2	2	5
$\begin{array}{r} 7 \\ - 5 \\ \hline \end{array}$ 2 6	$\begin{array}{r} 14 \\ - 8 \\ \hline \end{array}$ 5 5	$\begin{array}{r} 6 \\ - 4 \\ \hline \end{array}$ 4 6	$\begin{array}{r} 7 \\ - 2 \\ \hline \end{array}$ 3 8	$\begin{array}{r} 8 \\ - 3 \\ \hline \end{array}$
2	8	2	5	3
4	2	6	4	4
$\begin{array}{r} 12 \\ - 8 \\ \hline \end{array}$ 7 4	$\begin{array}{r} 6 \\ - 3 \\ \hline \end{array}$ 3 6	$\begin{array}{r} 12 \\ - 6 \\ \hline \end{array}$ 9 8	$\begin{array}{r} 8 \\ - 2 \\ \hline \end{array}$ 5 5	$\begin{array}{r} 9 \\ - 6 \\ \hline \end{array}$
2	3	6	6	3
3	4	6	5	4
$\begin{array}{r} 12 \\ - 7 \\ \hline \end{array}$ 5 4	$\begin{array}{r} 11 \\ - 7 \\ \hline \end{array}$ 5 9	$\begin{array}{r} 9 \\ - 3 \\ \hline \end{array}$ 7 6	$\begin{array}{r} 9 \\ - 6 \\ \hline \end{array}$ 3 8	$\begin{array}{r} 9 \\ - 4 \\ \hline \end{array}$
5	2	5	4	5
3	2	3	8	5
$\begin{array}{r} 9 \\ - 6 \\ \hline \end{array}$ 3 1	$\begin{array}{r} 6 \\ - 5 \\ \hline \end{array}$ 4 4	$\begin{array}{r} 11 \\ - 7 \\ \hline \end{array}$ 5 7	$\begin{array}{r} 9 \\ - 2 \\ \hline \end{array}$ 9 3	$\begin{array}{r} 11 \\ - 8 \\ \hline \end{array}$
3	3	6	4	4




LABERINTO CON OPERACIONES

Encuentra la meta siguiendo los resultados correctos a cada una de las operaciones matemáticas; restas.



$\begin{array}{r} 13 \\ - 8 \\ \hline \end{array}$ <p>3 2</p> <p>5</p>	$\begin{array}{r} 6 \\ - 5 \\ \hline \end{array}$ <p>3 6</p> <p>1</p>	$\begin{array}{r} 10 \\ - 4 \\ \hline \end{array}$ <p>5 8</p> <p>4</p>	$\begin{array}{r} 11 \\ - 3 \\ \hline \end{array}$ <p>6 3</p> <p>7</p>	$\begin{array}{r} 7 \\ - 4 \\ \hline \end{array}$ <p></p> <p>3</p>
$\begin{array}{r} 7 \\ - 6 \\ \hline \end{array}$ <p>3 8</p> <p>2</p>	$\begin{array}{r} 14 \\ - 6 \\ \hline \end{array}$ <p>5 7</p> <p>10</p>	$\begin{array}{r} 12 \\ - 5 \\ \hline \end{array}$ <p>7 7</p> <p>5</p>	$\begin{array}{r} 12 \\ - 5 \\ \hline \end{array}$ <p>4 9</p> <p>5</p>	$\begin{array}{r} 10 \\ - 4 \\ \hline \end{array}$ <p></p> <p>6</p>
$\begin{array}{r} 10 \\ - 7 \\ \hline \end{array}$ <p>3 4</p> <p>1</p>	$\begin{array}{r} 10 \\ - 4 \\ \hline \end{array}$ <p>7 5</p> <p>7</p>	$\begin{array}{r} 13 \\ - 5 \\ \hline \end{array}$ <p>7 2</p> <p>9</p>	$\begin{array}{r} 10 \\ - 6 \\ \hline \end{array}$ <p>4 8</p> <p>10</p>	$\begin{array}{r} 9 \\ - 1 \\ \hline \end{array}$ <p></p> <p>6</p>
$\begin{array}{r} 11 \\ - 4 \\ \hline \end{array}$ <p>5 2</p> <p>2</p>	$\begin{array}{r} 10 \\ - 5 \\ \hline \end{array}$ <p>3 4</p> <p>5</p>	$\begin{array}{r} 7 \\ - 5 \\ \hline \end{array}$ <p>2 3</p> <p>11</p>	$\begin{array}{r} 6 \\ - 3 \\ \hline \end{array}$ <p>2 2</p> <p>5</p>	$\begin{array}{r} 2 \\ - 1 \\ \hline \end{array}$ <p></p> <p>8</p>
$\begin{array}{r} 5 \\ - 1 \\ \hline \end{array}$ <p>4 6</p> <p>4</p>	$\begin{array}{r} 13 \\ - 7 \\ \hline \end{array}$ <p>6 3</p> <p>6</p>	$\begin{array}{r} 5 \\ - 2 \\ \hline \end{array}$ <p>3 1</p> <p>2</p>	$\begin{array}{r} 9 \\ - 8 \\ \hline \end{array}$ <p>1 5</p> <p>3</p>	$\begin{array}{r} 8 \\ - 3 \\ \hline \end{array}$ <p></p> <p>11</p>
<p>3</p>	<p>6</p>	<p>6</p>	<p>4</p>	<p>8</p>



LABERINTO CON OPERACIONES

Encuentra la meta siguiendo los resultados correctos a cada una de las operaciones matemáticas; restas.



$\begin{array}{r} 12 \\ - 5 \\ \hline \end{array}$ 7 3	$\begin{array}{r} 6 \\ - 3 \\ \hline \end{array}$ 3 3	$\begin{array}{r} 11 \\ - 8 \\ \hline \end{array}$ 3 5	$\begin{array}{r} 6 \\ - 3 \\ \hline \end{array}$ 3 6	$\begin{array}{r} 9 \\ - 6 \\ \hline \end{array}$ 3
7	2	2	2	3
3	6	9	3	6
$\begin{array}{r} 9 \\ - 6 \\ \hline \end{array}$ 2 5	$\begin{array}{r} 9 \\ - 1 \\ \hline \end{array}$ 8 7	$\begin{array}{r} 8 \\ - 1 \\ \hline \end{array}$ 8 2	$\begin{array}{r} 9 \\ - 8 \\ \hline \end{array}$ 4 3	$\begin{array}{r} 10 \\ - 7 \\ \hline \end{array}$ 2
3	8	4	1	2
3	7	3	5	5
$\begin{array}{r} 11 \\ - 8 \\ \hline \end{array}$ 5 9	$\begin{array}{r} 8 \\ - 1 \\ \hline \end{array}$ 7 4	$\begin{array}{r} 8 \\ - 4 \\ \hline \end{array}$ 2 4	$\begin{array}{r} 7 \\ - 4 \\ \hline \end{array}$ 6 8	$\begin{array}{r} 8 \\ - 3 \\ \hline \end{array}$ 4
6	5	4	3	4
5	4	7	6	7
$\begin{array}{r} 7 \\ - 5 \\ \hline \end{array}$ 2 2	$\begin{array}{r} 6 \\ - 4 \\ \hline \end{array}$ 2 7	$\begin{array}{r} 11 \\ - 4 \\ \hline \end{array}$ 5 2	$\begin{array}{r} 6 \\ - 1 \\ \hline \end{array}$ 5 5	$\begin{array}{r} 9 \\ - 5 \\ \hline \end{array}$ 4
2	3	6	4	4
6	4	7	5	3
$\begin{array}{r} 8 \\ - 2 \\ \hline \end{array}$ 6 7	$\begin{array}{r} 15 \\ - 8 \\ \hline \end{array}$ 7 8	$\begin{array}{r} 9 \\ - 1 \\ \hline \end{array}$ 8 7	$\begin{array}{r} 13 \\ - 6 \\ \hline \end{array}$ 7 5	$\begin{array}{r} 8 \\ - 3 \\ \hline \end{array}$ 6
7	8	9	7	6



LABERINTO CON OPERACIONES

Encuentra la meta siguiendo los resultados correctos a cada una de las operaciones matemáticas; restas.



$\begin{array}{r} 7 \\ -4 \\ \hline \end{array}$ 5 7	$\begin{array}{r} 10 \\ -3 \\ \hline \end{array}$ 4 7	$\begin{array}{r} 15 \\ -8 \\ \hline \end{array}$ 10 1	$\begin{array}{r} 2 \\ -1 \\ \hline \end{array}$ 3 4	$\begin{array}{r} 5 \\ -1 \\ \hline \end{array}$ 4
3	9	6	4	4
3	3	4	7	3
$\begin{array}{r} 13 \\ -8 \\ \hline \end{array}$ 6 6	$\begin{array}{r} 4 \\ -1 \\ \hline \end{array}$ 2 7	$\begin{array}{r} 11 \\ -5 \\ \hline \end{array}$ 6 4	$\begin{array}{r} 6 \\ -2 \\ \hline \end{array}$ 5 4	$\begin{array}{r} 9 \\ -6 \\ \hline \end{array}$ 3
5	3	6	6	3
9	7	4	7	1
$\begin{array}{r} 13 \\ -7 \\ \hline \end{array}$ 3 5	$\begin{array}{r} 13 \\ -6 \\ \hline \end{array}$ 10 5	$\begin{array}{r} 10 \\ -6 \\ \hline \end{array}$ 4 4	$\begin{array}{r} 8 \\ -4 \\ \hline \end{array}$ 2 4	$\begin{array}{r} 7 \\ -6 \\ \hline \end{array}$ 1
6	6	2	4	1
8	4	6	6	2
$\begin{array}{r} 11 \\ -4 \\ \hline \end{array}$ 7 6	$\begin{array}{r} 6 \\ -3 \\ \hline \end{array}$ 3 2	$\begin{array}{r} 13 \\ -8 \\ \hline \end{array}$ 3 3	$\begin{array}{r} 14 \\ -8 \\ \hline \end{array}$ 5 5	$\begin{array}{r} 5 \\ -3 \\ \hline \end{array}$ 2
10	2	5	6	2
8	5	2	7	5
$\begin{array}{r} 15 \\ -7 \\ \hline \end{array}$ 8 8	$\begin{array}{r} 15 \\ -7 \\ \hline \end{array}$ 11 4	$\begin{array}{r} 10 \\ -8 \\ \hline \end{array}$ 2 7	$\begin{array}{r} 11 \\ -4 \\ \hline \end{array}$ 6 8	$\begin{array}{r} 6 \\ -1 \\ \hline \end{array}$ 7
10	10	2	10	7



LABERINTO CON OPERACIONES

Encuentra la meta siguiendo los resultados correctos a cada una de las operaciones matemáticas; restas.



$\begin{array}{r} 17 \\ - 8 \\ \hline \end{array}$ <p>9 7</p>	$\begin{array}{r} 10 \\ - 3 \\ \hline \end{array}$ <p>6 4</p>	$\begin{array}{r} 8 \\ - 7 \\ \hline \end{array}$ <p>3 10</p>	$\begin{array}{r} 11 \\ - 1 \\ \hline \end{array}$ <p>12 3</p>	$\begin{array}{r} 7 \\ - 4 \\ \hline \end{array}$
9	7	1	13	3
10	7	5	8	6
$\begin{array}{r} 19 \\ - 9 \\ \hline \end{array}$ <p>12 8</p>	$\begin{array}{r} 17 \\ - 10 \\ \hline \end{array}$ <p>4 4</p>	$\begin{array}{r} 8 \\ - 5 \\ \hline \end{array}$ <p>2 13</p>	$\begin{array}{r} 17 \\ - 6 \\ \hline \end{array}$ <p>11 6</p>	$\begin{array}{r} 10 \\ - 4 \\ \hline \end{array}$
10	10	3	11	3
5	4	9	5	11
$\begin{array}{r} 7 \\ - 4 \\ \hline \end{array}$ <p>6 6</p>	$\begin{array}{r} 13 \\ - 7 \\ \hline \end{array}$ <p>5 10</p>	$\begin{array}{r} 20 \\ - 10 \\ \hline \end{array}$ <p>7 2</p>	$\begin{array}{r} 17 \\ - 12 \\ \hline \end{array}$ <p>7 13</p>	$\begin{array}{r} 20 \\ - 8 \\ \hline \end{array}$
3	3	13	6	12
11	9	6	4	12
$\begin{array}{r} 16 \\ - 4 \\ \hline \end{array}$ <p>12 14</p>	$\begin{array}{r} 16 \\ - 5 \\ \hline \end{array}$ <p>8 2</p>	$\begin{array}{r} 8 \\ - 4 \\ \hline \end{array}$ <p>4 6</p>	$\begin{array}{r} 10 \\ - 4 \\ \hline \end{array}$ <p>6 12</p>	$\begin{array}{r} 24 \\ - 12 \\ \hline \end{array}$
9	11	3	8	12
6	7	4	9	12
$\begin{array}{r} 15 \\ - 12 \\ \hline \end{array}$ <p>3 11</p>	$\begin{array}{r} 12 \\ - 3 \\ \hline \end{array}$ <p>9 1</p>	$\begin{array}{r} 9 \\ - 8 \\ \hline \end{array}$ <p>1 8</p>	$\begin{array}{r} 20 \\ - 12 \\ \hline \end{array}$ <p>8 12</p>	$\begin{array}{r} 13 \\ - 1 \\ \hline \end{array}$
4	6	1	6	10



LABERINTO CON OPERACIONES

Encuentra la meta siguiendo los resultados correctos a cada una de las operaciones matemáticas; restas.



$\begin{array}{r} 8 \\ - 5 \\ \hline \end{array}$ <p>3 8</p>	$\begin{array}{r} 10 \\ - 2 \\ \hline \end{array}$ <p>8 9</p>	$\begin{array}{r} 12 \\ - 3 \\ \hline \end{array}$ <p>9 5</p>	$\begin{array}{r} 6 \\ - 3 \\ \hline \end{array}$ <p>3 12</p>	$\begin{array}{r} 13 \\ - 3 \\ \hline \end{array}$
5	6	9	6	10
3	5	4	4	5
$\begin{array}{r} 12 \\ - 10 \\ \hline \end{array}$ <p>2 6</p>	$\begin{array}{r} 11 \\ - 5 \\ \hline \end{array}$ <p>4 2</p>	$\begin{array}{r} 12 \\ - 8 \\ \hline \end{array}$ <p>6 3</p>	$\begin{array}{r} 8 \\ - 6 \\ \hline \end{array}$ <p>5 2</p>	$\begin{array}{r} 8 \\ - 6 \\ \hline \end{array}$
2	7	4	2	3
7	8	10	7	2
$\begin{array}{r} 10 \\ - 3 \\ \hline \end{array}$ <p>7 7</p>	$\begin{array}{r} 17 \\ - 10 \\ \hline \end{array}$ <p>10 7</p>	$\begin{array}{r} 16 \\ - 6 \\ \hline \end{array}$ <p>9 5</p>	$\begin{array}{r} 10 \\ - 4 \\ \hline \end{array}$ <p>8 3</p>	$\begin{array}{r} 11 \\ - 7 \\ \hline \end{array}$
4	7	10	6	4
2	10	3	4	9
$\begin{array}{r} 7 \\ - 6 \\ \hline \end{array}$ <p>4 9</p>	$\begin{array}{r} 16 \\ - 6 \\ \hline \end{array}$ <p>11 5</p>	$\begin{array}{r} 11 \\ - 8 \\ \hline \end{array}$ <p>4 3</p>	$\begin{array}{r} 9 \\ - 8 \\ \hline \end{array}$ <p>1 7</p>	$\begin{array}{r} 9 \\ - 3 \\ \hline \end{array}$
1	10	3	2	6
9	9	1	5	2
$\begin{array}{r} 14 \\ - 5 \\ \hline \end{array}$ <p>9 9</p>	$\begin{array}{r} 16 \\ - 7 \\ \hline \end{array}$ <p>9 1</p>	$\begin{array}{r} 6 \\ - 5 \\ \hline \end{array}$ <p>3 3</p>	$\begin{array}{r} 16 \\ - 10 \\ \hline \end{array}$ <p>6 3</p>	$\begin{array}{r} 6 \\ - 3 \\ \hline \end{array}$
10	10	4	6	6



LABERINTO CON OPERACIONES

Encuentra la meta siguiendo los resultados correctos a cada una de las operaciones matemáticas; restas.



$\begin{array}{r} 9 \\ - 3 \\ \hline \end{array}$ <p>6 9</p>	$\begin{array}{r} 17 \\ - 8 \\ \hline \end{array}$ <p>10 3</p>	$\begin{array}{r} 7 \\ - 1 \\ \hline \end{array}$ <p>6 6</p>	$\begin{array}{r} 17 \\ - 10 \\ \hline \end{array}$ <p>9 6</p>	$\begin{array}{r} 14 \\ - 7 \\ \hline \end{array}$
6	8	5	7	7
2	7	4	4	9
$\begin{array}{r} 8 \\ - 6 \\ \hline \end{array}$ <p>2 8</p>	$\begin{array}{r} 9 \\ - 1 \\ \hline \end{array}$ <p>11 5</p>	$\begin{array}{r} 11 \\ - 7 \\ \hline \end{array}$ <p>7 5</p>	$\begin{array}{r} 9 \\ - 6 \\ \hline \end{array}$ <p>3 3</p>	$\begin{array}{r} 9 \\ - 3 \\ \hline \end{array}$
3	8	4	2	6
13	1	3	4	4
$\begin{array}{r} 14 \\ - 4 \\ \hline \end{array}$ <p>8 4</p>	$\begin{array}{r} 4 \\ - 3 \\ \hline \end{array}$ <p>1 3</p>	$\begin{array}{r} 8 \\ - 5 \\ \hline \end{array}$ <p>5 2</p>	$\begin{array}{r} 7 \\ - 6 \\ \hline \end{array}$ <p>3 5</p>	$\begin{array}{r} 9 \\ - 6 \\ \hline \end{array}$
10	3	6	1	3
5	3	5	9	3
$\begin{array}{r} 7 \\ - 2 \\ \hline \end{array}$ <p>5 1</p>	$\begin{array}{r} 3 \\ - 2 \\ \hline \end{array}$ <p>1 6</p>	$\begin{array}{r} 10 \\ - 4 \\ \hline \end{array}$ <p>6 9</p>	$\begin{array}{r} 13 \\ - 4 \\ \hline \end{array}$ <p>10 6</p>	$\begin{array}{r} 11 \\ - 7 \\ \hline \end{array}$
5	4	8	11	4
8	8	12	7	8
$\begin{array}{r} 13 \\ - 5 \\ \hline \end{array}$ <p>8 7</p>	$\begin{array}{r} 13 \\ - 6 \\ \hline \end{array}$ <p>7 10</p>	$\begin{array}{r} 14 \\ - 4 \\ \hline \end{array}$ <p>11 9</p>	$\begin{array}{r} 15 \\ - 6 \\ \hline \end{array}$ <p>6 7</p>	$\begin{array}{r} 14 \\ - 7 \\ \hline \end{array}$
7	7	9	8	4

