









# Escribe el número que representan los palillos

UNIDADES	U	
DECENAS	D	
CENTENAS	C	
UNIDADES DE MILLAR	UM	
DECENAS DE MILLAR	DM	
CENTENAS DE MILLAR	DM	

Escribe el número que representan los palillos



Escribe el número que representan los palillos

A blue-bordered box containing two bundles of 10 sticks each (one green rubber band, one red rubber band) and five individual sticks. To the right is a purple-bordered empty box for writing the number.

A green-bordered box containing two bundles of 10 sticks each (both green rubber bands) and four individual sticks. To the right is a blue-bordered empty box for writing the number.

Escribe el número que representan los palillos

A blue-bordered box containing 1 bundle of 10 sticks tied with a green rubber band and 7 individual sticks. To the right is an empty purple-bordered box for the answer.


A green-bordered box containing 2 bundles of 10 sticks tied with green rubber bands, 1 bundle of 5 sticks tied with a red rubber band, and 1 bundle of 5 sticks tied with a red rubber band. To the right is an empty blue-bordered box for the answer.

Escribe el número que representan los palillos


A row of seven bundles of sticks, each tied with a rubber band. The first six bundles are tied with green rubber bands and contain ten sticks each. The seventh bundle is tied with a red rubber band and contains five sticks. To the right is a purple rounded square box for writing the total number.

A row of six bundles of sticks, each tied with a rubber band. The first four bundles are tied with green rubber bands and contain ten sticks each. The fifth and sixth bundles are tied with red rubber bands and contain five sticks each. To the right is a blue rounded square box for writing the total number.

Escribe el número que representan los palillos



A rectangular box with a red border containing two bundles of sticks. The first bundle is tied with a green rubber band and contains 10 sticks. The second bundle is tied with a red rubber band and contains 5 sticks. To the right of these bundles are three individual sticks. To the right of the entire group is an empty rounded rectangular box with a green border, intended for writing the total number of sticks.



A rectangular box with a dark red border containing four bundles of sticks. The first two bundles are tied with green rubber bands and each contains 10 sticks. The next two bundles are tied with red rubber bands and each contains 5 sticks. To the right of these bundles are four individual sticks. To the right of the entire group is an empty rounded rectangular box with an orange border, intended for writing the total number of sticks.

Escribe el número que representan los palillos



A row of 19 sticks. The first stick is a bundle of 10 sticks tied with a green rubber band. The next four sticks are bundles of 5 sticks each, tied with red rubber bands. The last four sticks are individual sticks.



A row of 13 sticks. The first stick is a bundle of 10 sticks tied with a green rubber band. The second stick is a bundle of 5 sticks tied with a red rubber band. The last seven sticks are individual sticks.

Escribe el número que representan los palillos





Escribe el número que representan los palillos



Escribe el número que representan los palillos




Escribe el número que representan los palillos



Escribe el número que representan los palillos



Escribe el número que representan los palillos



Escribe el número que representan los palillos



A row of five bundles of sticks. The first bundle is tied with a green rubber band and contains 10 sticks. The second bundle is tied with a red rubber band and contains 5 sticks. The third bundle is a single stick. The fourth bundle is tied with a red rubber band and contains 5 sticks. The fifth bundle is a single stick. To the right of the bundles is a blue rounded rectangular box for writing the total number of sticks.



A row of six bundles of sticks. The first bundle is tied with a red rubber band and contains 5 sticks. The second bundle is tied with a red rubber band and contains 5 sticks. The third bundle is a single stick. The fourth bundle is a single stick. The fifth bundle is tied with a red rubber band and contains 5 sticks. The sixth bundle is tied with a red rubber band and contains 5 sticks. To the right of the bundles is an orange rounded rectangular box for writing the total number of sticks.

Escribe el número que representan los palillos

