



FIGURAS GEOMÉTRICAS

¿Cuántos lados tienen?

¿Cuántos lados tienen?



Cuadrado




2

4

3

Círculo



0

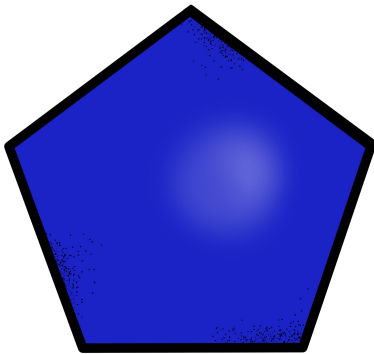
1

6

¿Cuántos lados tienen?



Pentágono




4

6

5

Triángulo



3


4

1

¿Cuántos lados tienen?



Rectángulo

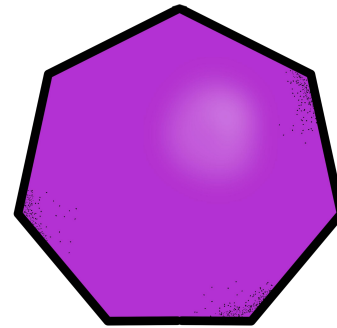


4

5

6

Heptágono



6


5

7

¿Cuántos lados tienen?



Hexágono




5

6

7

Cruz



8


10

12

¿Cuántos lados tienen?



Óvalo




1

6

0

Estrella



10


9

12

¿Cuántos lados tienen?



Paralelogramo

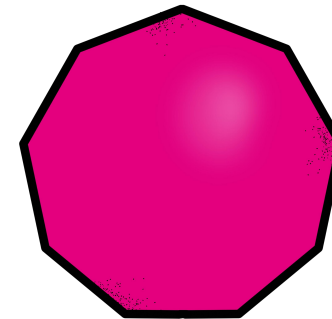


5

4

6

Enéagono



8


9

11

¿Cuántos lados tienen?



Decágono

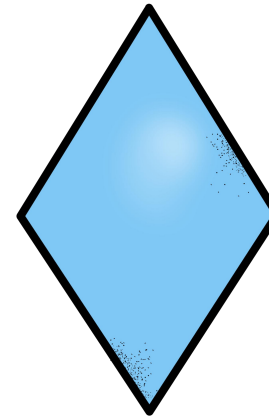


7

12

9

Rombo



6

8

4