









# CÁLCULO MENTAL

Averigua el valor de cada figura  
geométrica y resuelve la última operación

 $+$  $= 4$

 $+$  $= 3$

 $+$  $= 4$

 $-$  $= ?$

$$\square + \square = 2$$

$$\square - \square = 3$$

$$\square + \square = 9$$

$$\square + \square = ?$$

$$\text{Brown diamond} - \text{Pink diamond} = 3$$

$$\text{Pink diamond} + \text{Pink diamond} = 6$$

$$\text{Blue diamond} - \text{Brown diamond} = 2$$

$$\text{Blue diamond} - \text{Pink diamond} = ?$$

$$\text{Green Hexagon} - \text{Yellow Hexagon} = 5$$

$$\text{Blue Hexagon} + \text{Blue Hexagon} = 6$$

$$\text{Green Hexagon} + \text{Green Hexagon} = 20$$

$$\text{Yellow Hexagon} + \text{Green Hexagon} = ?$$

$$\text{Pink Trapezoid} + \text{Grey Trapezoid} = 7$$

$$\text{Grey Trapezoid} + \text{Grey Trapezoid} = 8$$

$$\text{Yellow Trapezoid} - \text{Pink Trapezoid} = 4$$

$$\text{Yellow Trapezoid} - \text{Grey Trapezoid} = ?$$

$$\text{Green Pentagon} + \text{Green Pentagon} = 10$$

$$\text{Cyan Pentagon} + \text{Green Pentagon} = 7$$

$$\text{Orange Pentagon} - \text{Cyan Pentagon} = 4$$

$$\text{Green Pentagon} + \text{Orange Pentagon} = ?$$

$$\text{Green Parallelogram} + \text{Blue Parallelogram} = 7$$

$$\text{Pink Parallelogram} - \text{Blue Parallelogram} = 2$$

$$\text{Pink Parallelogram} + \text{Pink Parallelogram} = 12$$

$$\text{Green Parallelogram} - \text{Green Parallelogram} = ?$$