


Coloca los números que faltan y haz la suma como el ejemplo



$$\boxed{2} + \boxed{2} = \boxed{4}$$




$$\boxed{\phantom{0}} + \boxed{\phantom{0}} = \boxed{\phantom{0}}$$



$$\boxed{\phantom{0}} + \boxed{\phantom{0}} = \boxed{\phantom{0}}$$



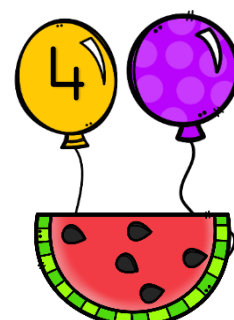
$$\boxed{\phantom{0}} + \boxed{\phantom{0}} = \boxed{\phantom{0}}$$



$$\boxed{\phantom{0}} + \boxed{\phantom{0}} = \boxed{\phantom{0}}$$



$$\boxed{\phantom{0}} + \boxed{\phantom{0}} = \boxed{\phantom{0}}$$



$$\boxed{\phantom{0}} + \boxed{\phantom{0}} = \boxed{\phantom{0}}$$




$$\boxed{\phantom{0}} + \boxed{\phantom{0}} = \boxed{\phantom{0}}$$

Coloca los números que faltan y haz la suma como el ejemplo



$$\square + \square = \square$$




$$\square + \square = \square$$



$$\square + \square = \square$$




$$\square + \square = \square$$



$$\square + \square = \square$$



$$\square + \square = \square$$




$$\square + \square = \square$$



$$\square + \square = \square$$

Coloca los números que faltan y haz la suma como el ejemplo




$$\square + \square = \square$$




$$\square + \square = \square$$



$$\square + \square = \square$$



$$\square + \square = \square$$



$$\square + \square = \square$$



$$\square + \square = \square$$




$$\square + \square = \square$$



$$\square + \square = \square$$

Coloca los números que faltan y haz la suma como el ejemplo



$$\square + \square = \square$$



$$\square + \square = \square$$



$$\square + \square = \square$$



$$\square + \square = \square$$



$$\square + \square = \square$$



$$\square + \square = \square$$




$$\square + \square = \square$$



$$\square + \square = \square$$


Coloca los números que faltan y haz la suma como el ejemplo




$$\square + \square = \square$$



$$\square + \square = \square$$




$$\square + \square = \square$$




$$\square + \square = \square$$



$$\square + \square = \square$$



$$\square + \square = \square$$




$$\square + \square = \square$$




$$\square + \square = \square$$

Coloca los números que faltan y haz la suma como el ejemplo




$$\square + \square = \square$$




$$\square + \square = \square$$




$$\square + \square = \square$$



$$\square + \square = \square$$




$$\square + \square = \square$$



$$\square + \square = \square$$



$$\square + \square = \square$$



$$\square + \square = \square$$