






Observa y resuelve:

				
3	9	6	5	2






$$\text{Red Circle} + \text{Orange Star} = \square$$

$$\text{Blue Square} - \text{Green Diamond} = \square$$

$$\text{Green Diamond} + \text{Yellow Triangle} = \square$$

$$\text{Red Circle} - \text{Yellow Triangle} = \square$$

Observa y resuelve:

				
4	10	5	8	3





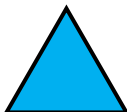
$$\text{Yellow Star} + \text{Blue Circle} = \square$$

$$\text{Green Triangle} - \text{Red Diamond} = \square$$

$$\text{Orange Square} + \text{Orange Square} = \square$$

$$\text{Yellow Star} - \text{Blue Circle} = \square$$

Observa y resuelve:

				
10	6	4	12	1

$$\text{Yellow square} + \text{Orange diamond} = \square$$

$$\text{Red star} - \text{Yellow square} = \square$$

$$\text{Green circle} + \text{Red star} = \square$$

$$\text{Green circle} - \text{Blue triangle} = \square$$