

Coloca los números y resuelve las siguientes sumas:

$$\text{Apple} = 3$$

$$\text{Pear} = 1$$

$$\text{Orange} = 5$$


$$\text{Grapes} = 2$$


$$\text{Apple} + \text{Pear} + \text{Apple} + \text{Orange} = \square$$


$$\text{Grapes} + \text{Apple} + \text{Orange} + \text{Pear} = \square$$

$$\text{Pear} + \text{Grapes} + \text{Pear} + \text{Apple} = \square$$





Coloca los números y resuelve las siguientes sumas:





 = 6





 = 4

 = 2

 = 5

 +  +  +  =

 +  +  +  =

 +  +  +  =

Coloca los números y resuelve las siguientes sumas:

$$\text{Fox} = 7$$

$$\text{Horse} = 2$$

$$\text{Giraffe} = 4$$


$$\text{Tiger} = 10$$

$$\text{Tiger} + \text{Horse} + \text{Giraffe} + \text{Fox} = \square$$

$$\text{Giraffe} + \text{Fox} + \text{Giraffe} + \text{Tiger} = \square$$


$$\text{Horse} + \text{Giraffe} + \text{Horse} + \text{Giraffe} = \square$$





Coloca los números y resuelve las siguientes sumas:





 = 9





 = 3

 = 4


 = 8

 +  +  +  =

 +  +  +  =

 +  +  +  =

Coloca los números y resuelve las siguientes sumas:





 = 10





 = 6

 = 4

 = 5

 +  +  +  =

 +  +  +  =

 +  +  +  =