

Operaciones en el espacio

Sumas y restas sin llevar



16

 $43 - 21$



14

 $19 - 7$

13

 $36 - 13$

12

 $45 + 12$



18

 $59 - 5$

31

 $31 + 6$

30

 $41 + 12$



27

 $51 + 5$

10

 $32 - 11$

19

 $52 + 8$

32

 $23 - 14$



26

 $57 - 34$



20

 $41 + 6$



22

 $62 + 7$

23

 $26 + 13$

24

 $17 + 2$



8

 $37 - 5$

SALIDA



1

 $11 + 3$

2

 $14 - 2$

3

 $25 + 4$



5

 $17 - 6$

6

 $28 - 5$



Dino-operaciones

Sumas con llevadas



17




16

$61 + 19$

15

$56 + 15$

14



13

$36 + 15$

12

$55 + 16$

11



18

$49 + 11$

31

$61 + 13$


30

$76 + 19$

29



28



27

$91 + 5$

10

$37 + 14$


19

$67 + 11$

32

$81 + 19$


LLEGADA



26

$73 + 24$

9



20

$75 + 16$

21

$61 + 19$

22



23

$80 + 12$

24

$60 + 17$

25

$87 + 8$

8

$19 + 15$

SALIDA




1

$35 + 42$

2

$27 + 15$

3



4

$24 + 27$

5

$31 + 19$

6



7

$43 + 28$



Un mar de operaciones

Restas con llevadas



SALIDA

1

$21 - 16$

2

$32 - 18$

2

$33 - 17$

4

$47 - 29$

5

$31 - 18$

6



7

$42 - 27$

30

$70 - 16$

29

$41 - 22$


28

$63 - 25$

27

$43 - 13$

26



25

$64 - 25$

8

$43 - 26$

31



32

$83 - 17$


LLEGADA




24

$64 - 25$

9



18



19

$25 - 11$


20

$33 - 20$

21



22



23

$46 - 17$

10

$21 - 16$

17

$62 - 25$

16

$61 - 28$

15



14

$53 - 49$


13

$55 - 37$

12

$54 - 25$

11



Selva de operaciones

Sumas y restas de 3 cifras con llevadas



SALIDA

1

$123 + 234$


2

$335 - 246$

2

$233 + 148$

4



5

$541 - 217$

6

$432 + 178$

7



30

$916 - 307$

29

$925 - 314$

28




27

$847 - 319$

26

$832 - 238$

25



8

$372 - 143$

31

$900 + 37$

32

$982 + 18$

LLEGADA



24



9

$524 + 256$

18



19

$623 - 208$

20

$635 + 175$

21

$511 - 105$

22

$777 + 133$

23

$742 - 313$

10

$459 + 172$


17

$568 + 312$

16

$504 + 244$

15



14

$466 - 319$

13

$222 - 114$

12



11

$222 - 114$





Parque de operaciones

Sumas y restas de 4 cifras con llevadas



17

$8.455 - 1.617$

16



15

$7.956 - 2.916$

14

$7.337 + 1.458$

13

$6.131 - 2.043$

12

$6.153 + 3.267$

11

$5.322 - 1.154$

18

$8.455 - 1.617$

31

$9.123 + 4.76$

30

$9.341 - 4.413$

29

$9.519 - 4.305$

28

$3.243 + 1.859$

27

$5.866 + 2.185$

10



19

$8.331 - 3.912$

32

$9.558 + 442$



LLEGADA



26

$3.532 + 2.675$


9

$4.356 + 1.759$

20

$8.711 + 1.199$

21



22



23

$9.148 + 377$


24

$3.243 + 1.859$

25

$4.357 - 3.158$

8



SALIDA



1

$1.123 + 1.387$

2

$1.745 - 1.387$

3

$2.455 + 1.157$

4

$2.821 - 1.253$

5



6

$3.866 + 2.185$

7

$4.172 - 2.053$

Potter multiplicaciones



SALIDA

1

343×2

2

527×2

3

315×2

4

743×3

5



6

326×3

7

135×3

30

524×8

29

136×7

28



27

259×3

26

259×3

25

349×9

8

231×4

31

645×9

32

1.524×6

LLEGADA



24

349×9

9



18

136×7

19

534×7

20

235×8

21

456×8

22



23



10

427×4

17



16

728×6

15



14

317×6

13

643×5

12

267×5

11

347×5

Super-operaciones



SALIDA

1

3.728×34

2

14.234×43

3

18.345×26


4

22.746×37

5

54.379×82

6



7

4.3740×28

30



29

10.4054×58

28

32.634×83

27



26

34.648×66

25

74.279×54

8



31



32

13.3045×99

LLEGADA



24

3.335×234

9

12.405×56

18

48.923×33

19

15.394×47

20

57.128×52

21

23.035×62

22



23

4.721×94

10

23.659×63

17

32.765×75


16



15

12.378×43

14



13

42.722×57

12

74.359×49

11

34.527×60



En busca de las divisiones

17
65.234 : 4

16
26.743 : 3

15
18.456 : 8

14
12.569 : 2

13
33.773 : 3

12


11
45.534 : 5

18


31
43.865 : 6

30
12.674 : 4

29
56.893 : 7


28
25.678 : 8

27
45.875 : 9

10


19


32
55.555 : 5

 **LLEGADA** 

26
63.377 : 5

9
89.569 : 9



20
13.789 : 3

21
24.068 : 2

22
55.080 : 5

23
76.566 : 3

24


25


8
49.779 : 7


SALIDA

1
3.562 : 2

2
31.793 : 3

3
44.628 : 4

4
12.328 : 2

5
23.743 : 6

6


7


EVALUACIÓN



Nombre: _____

Fecha: _____

Escribe el número de la operación. Después coloca la operación correctamente y resuélvela.