


¿Cuántas manzanas hay?



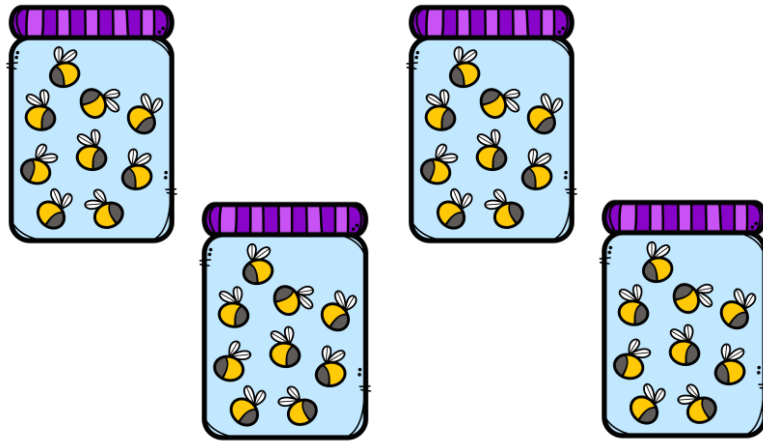
$$\underline{\quad} \times \underline{\quad} = \underline{\quad}$$

¿Cuántas galletas hay?



$$\underline{\quad} \times \underline{\quad} = \underline{\quad}$$

¿Cuántas abejas hay?




$$\underline{\quad} \times \underline{\quad} = \underline{\quad}$$

¿Cuántos globos hay?



$$\underline{\quad} \times \underline{\quad} = \underline{\quad}$$

¿Cuántos caramelos hay?



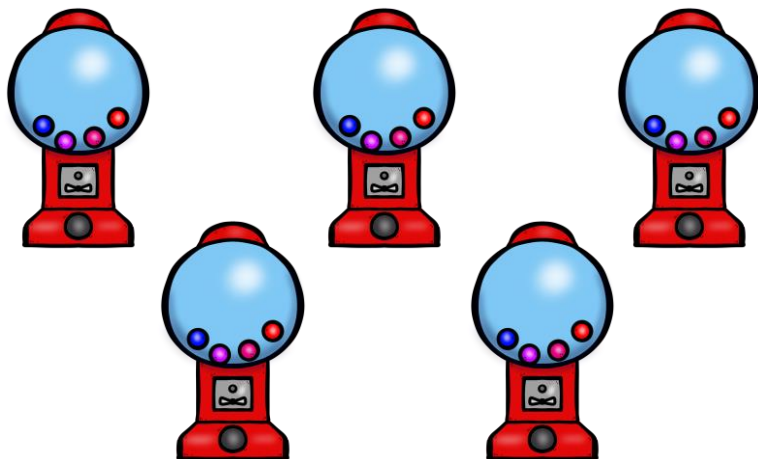
$$\underline{\hspace{2cm}} \times \underline{\hspace{2cm}} = \underline{\hspace{2cm}}$$

¿Cuántos peces hay?




$$\underline{\hspace{2cm}} \times \underline{\hspace{2cm}} = \underline{\hspace{2cm}}$$

¿Cuántas canicas hay?



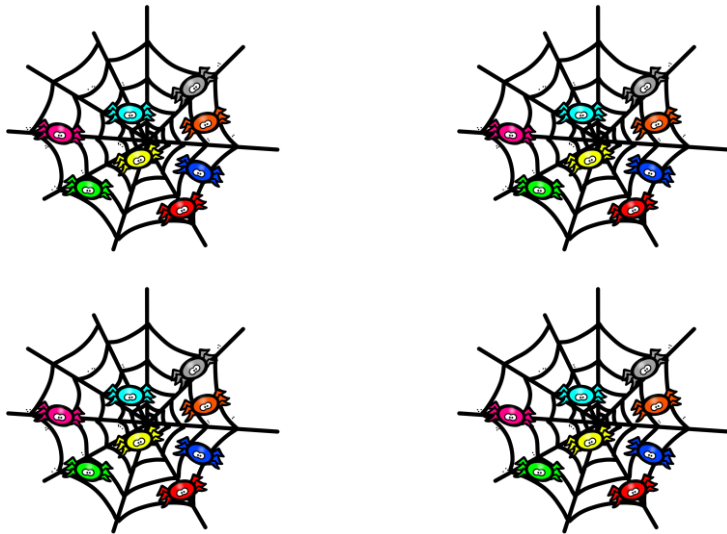
$$\underline{\quad} \times \underline{\quad} = \underline{\quad}$$

¿Cuántos huevos hay?



$$\underline{\quad} \times \underline{\quad} = \underline{\quad}$$

¿Cuántas arañas hay?



$$\underline{\hspace{2cm}} \times \underline{\hspace{2cm}} = \underline{\hspace{2cm}}$$

¿Cuántos pájaros hay?



$$\underline{\hspace{2cm}} \times \underline{\hspace{2cm}} = \underline{\hspace{2cm}}$$