


# CUADERNO DE

# MATEMÁTICAS

$$2 + 3 = 5$$


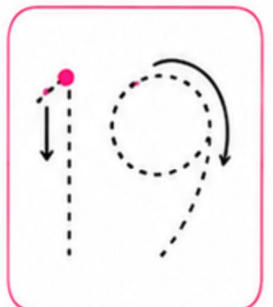
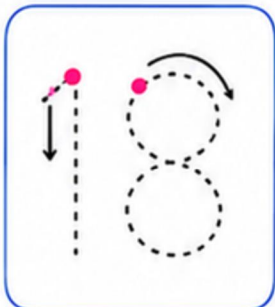
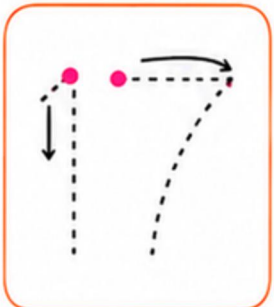
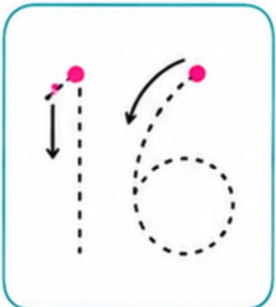
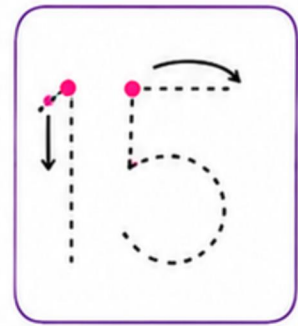
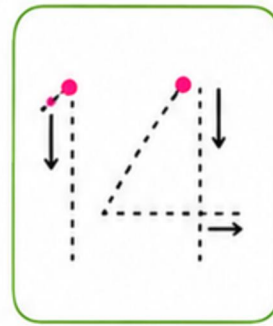
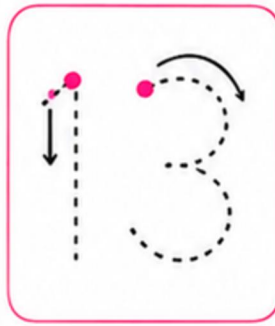
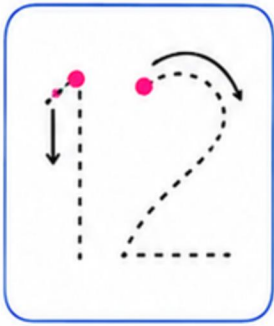
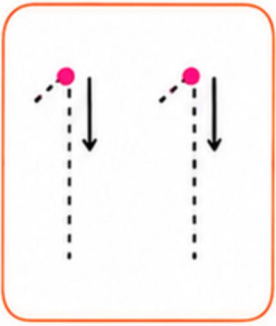
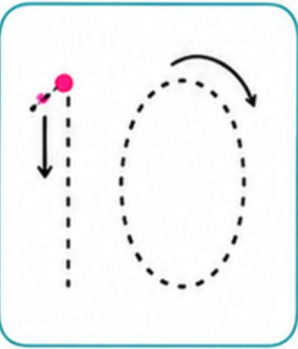
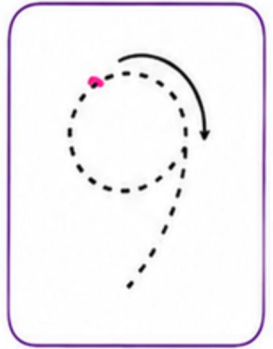
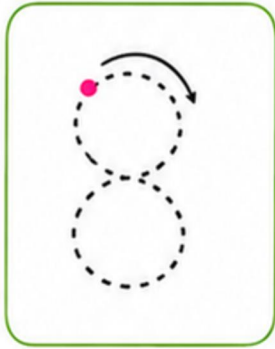
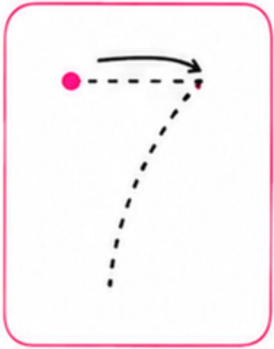
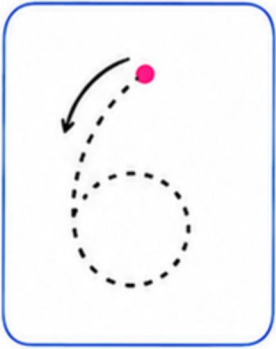

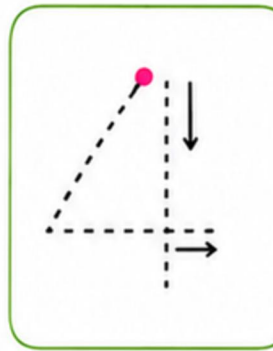
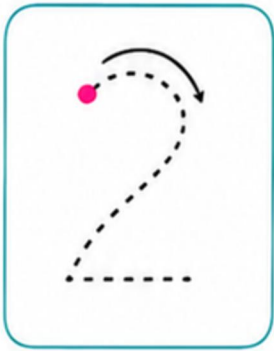
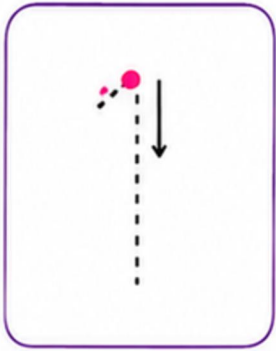


$$7 - 2 = 5$$



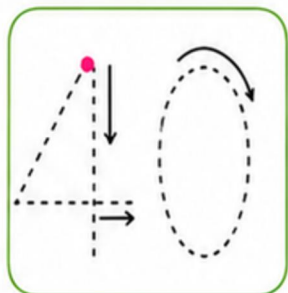
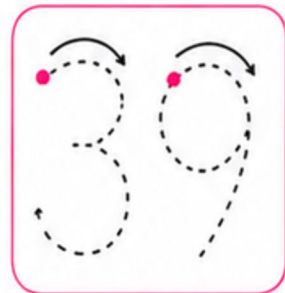
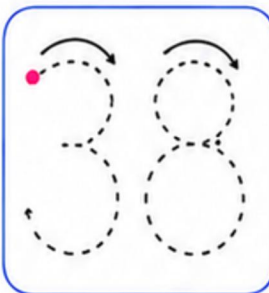
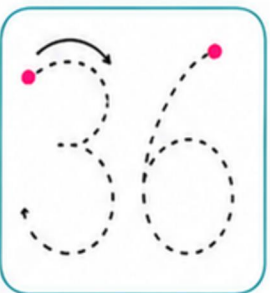
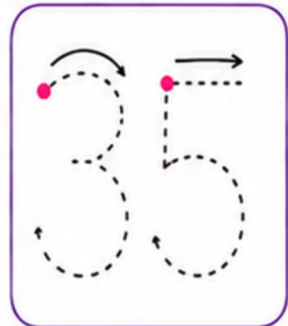
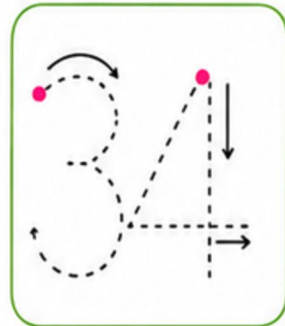
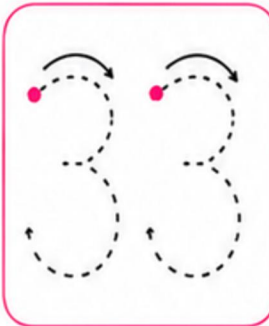
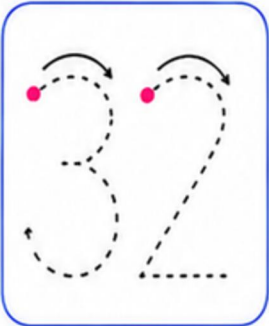
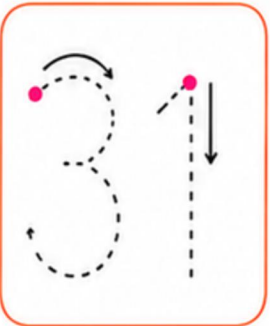
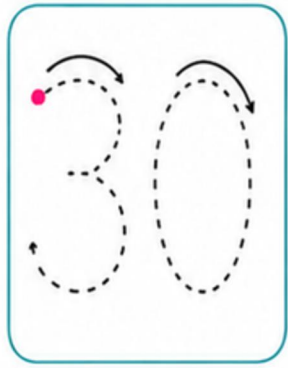
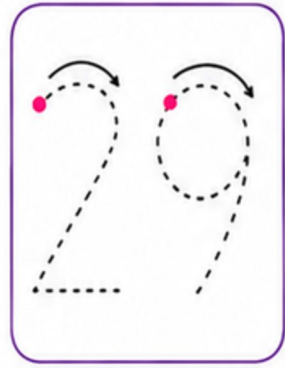

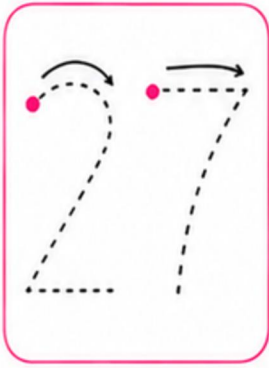
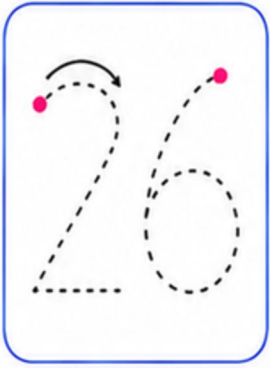
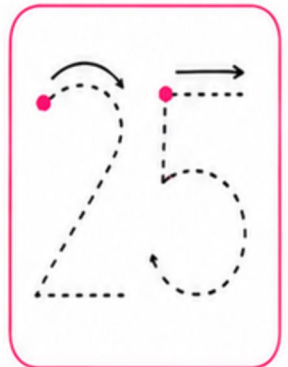
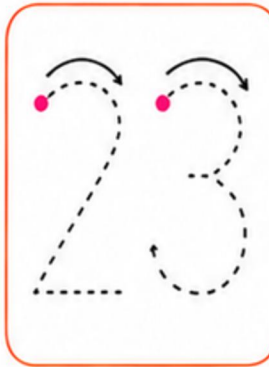
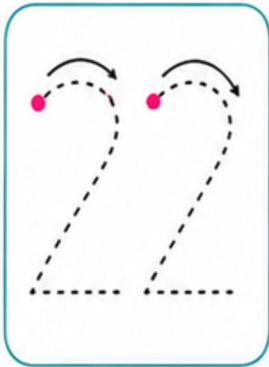
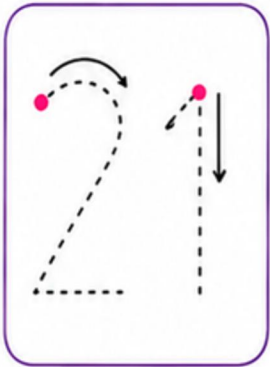
# REPASA LOS NÚMEROS

Repasa los números siguiendo  
las líneas punteadas.



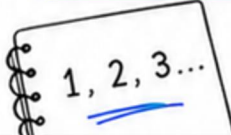
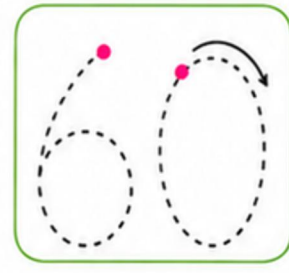
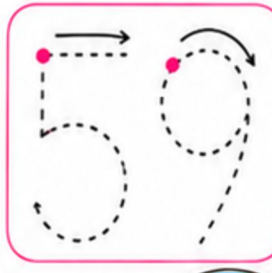
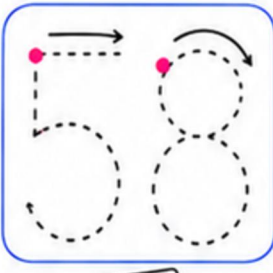
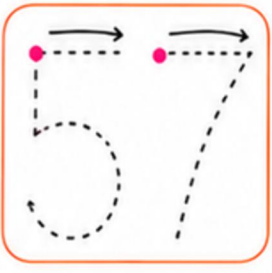
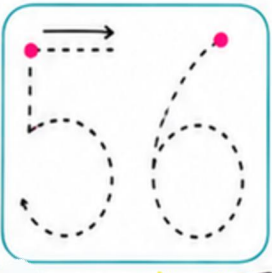
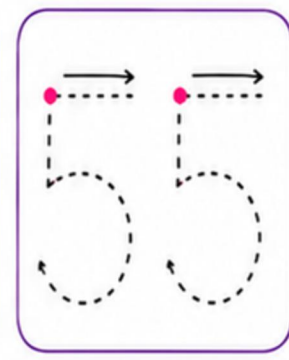
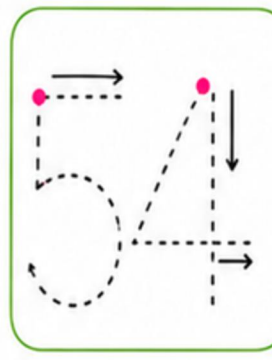
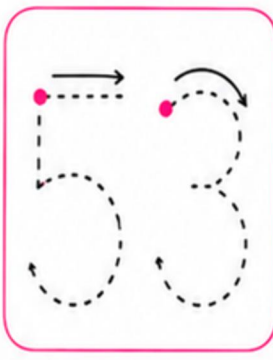
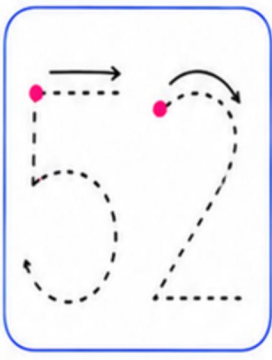
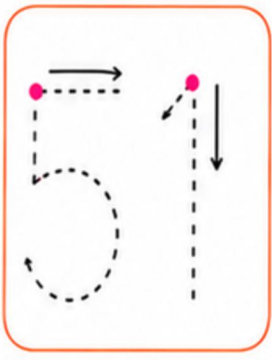
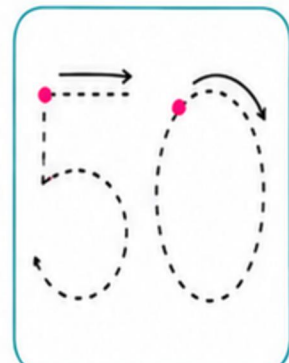
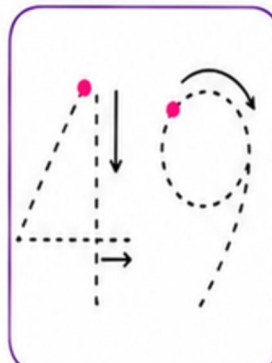
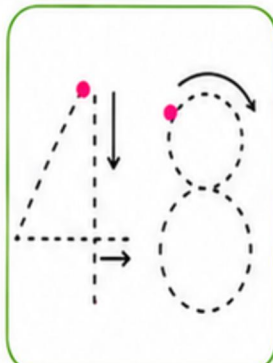
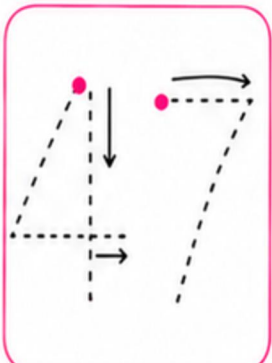
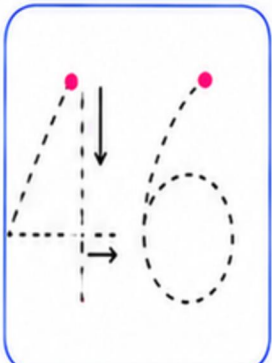
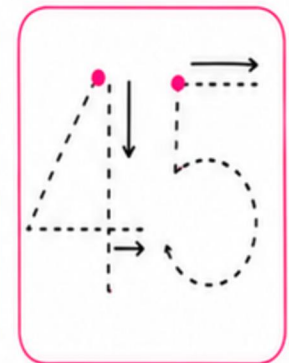
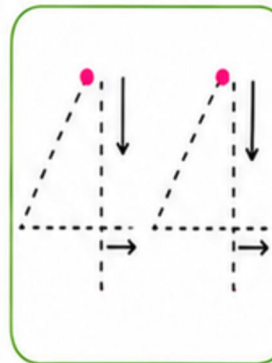
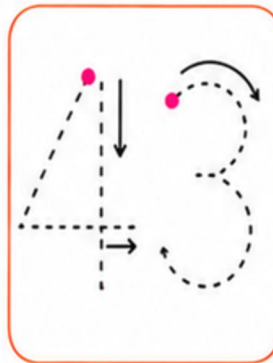
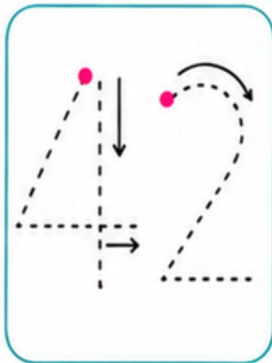
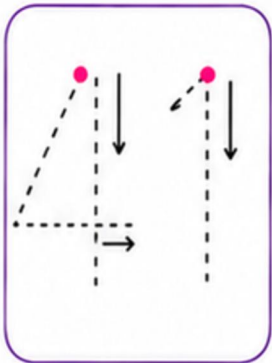
# REPASA LOS NÚMEROS

Repasa los números siguiendo  
las líneas punteadas.



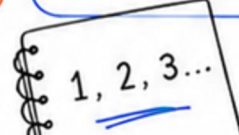
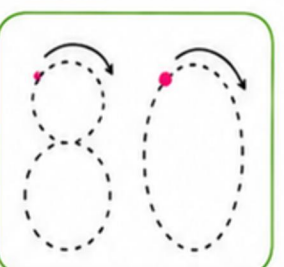
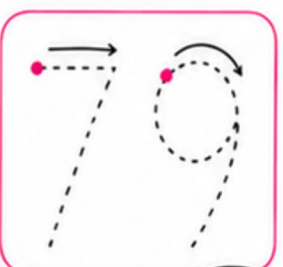
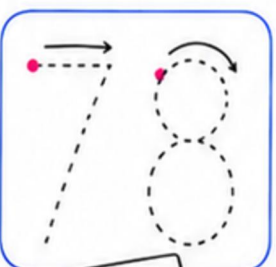
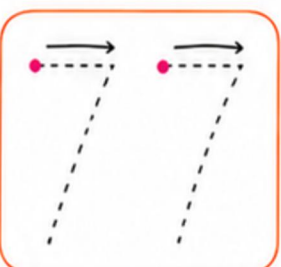
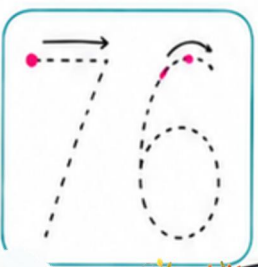
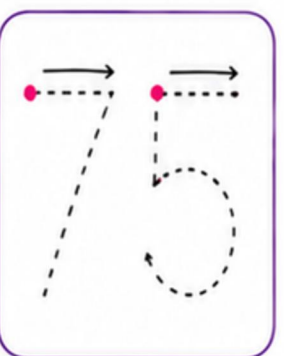
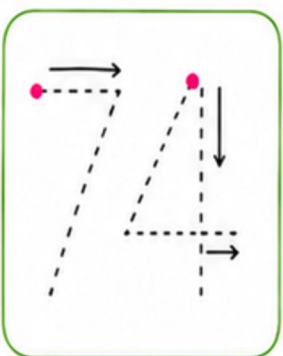
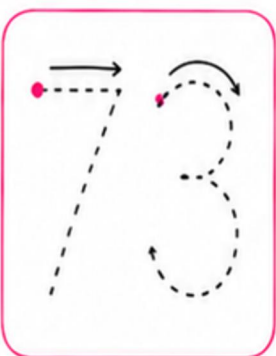
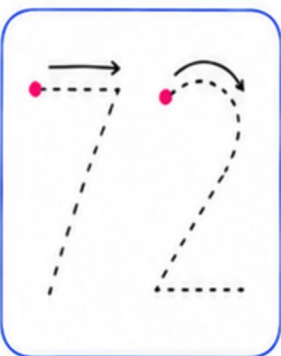
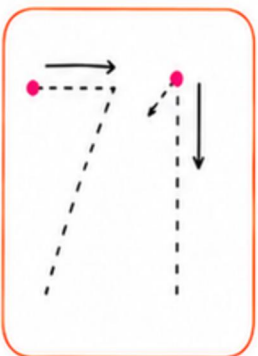
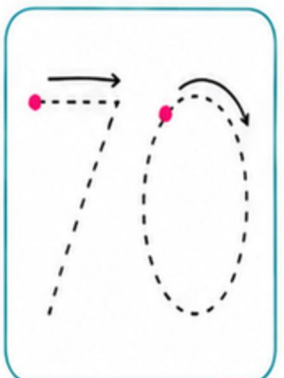
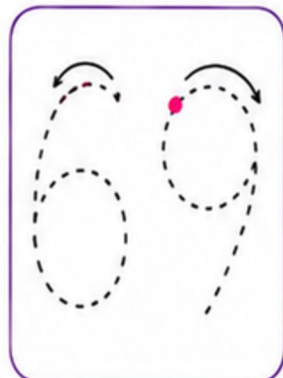
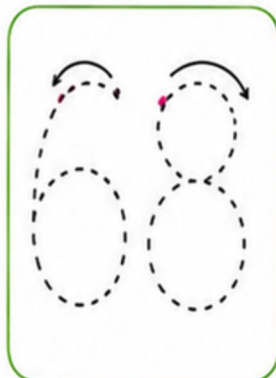
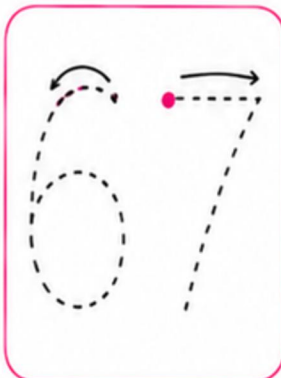
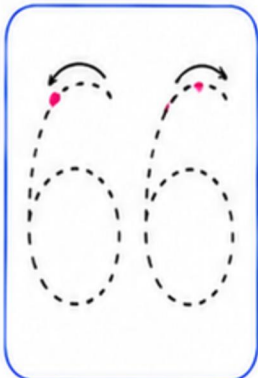
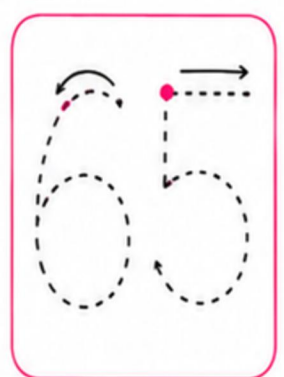
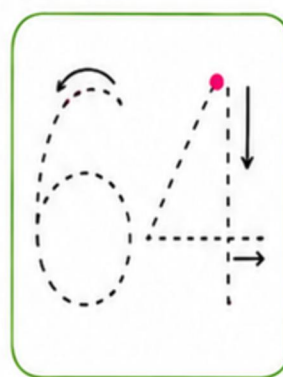
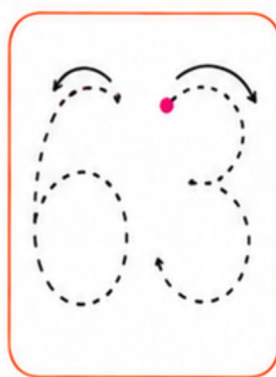
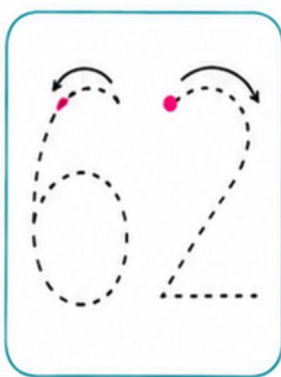
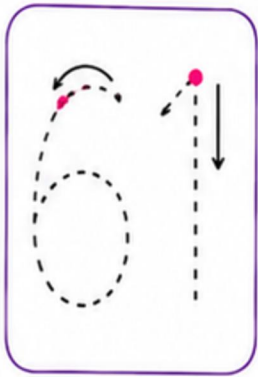
# REPASA LOS NÚMEROS

Repasa los números siguiendo  
las líneas punteadas.



# REPASA LOS NÚMEROS

Repasa los números siguiendo  
las líneas punteadas.

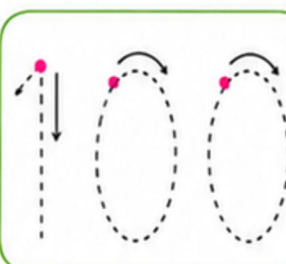
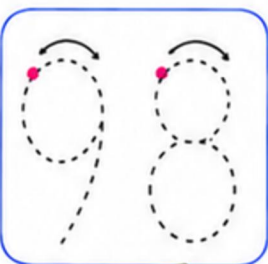
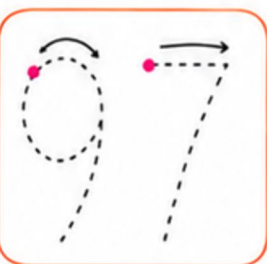
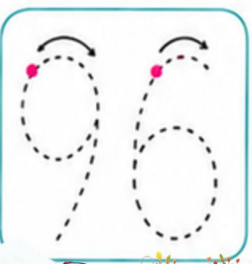
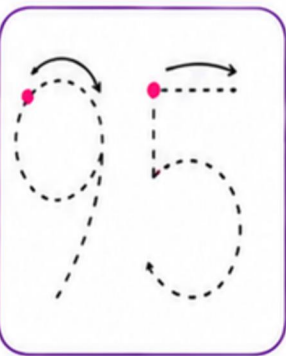
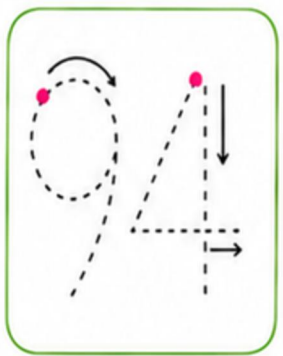
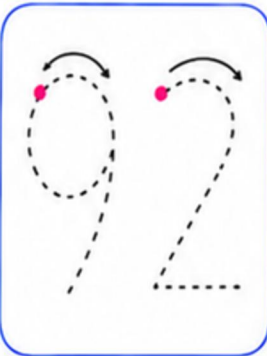
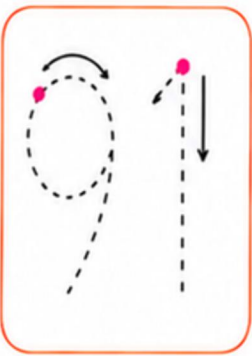
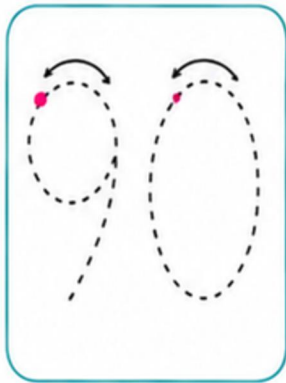
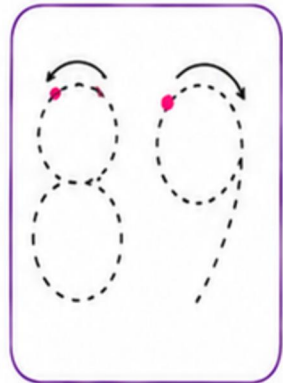
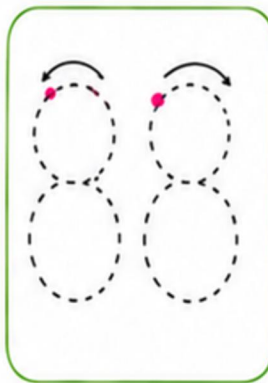
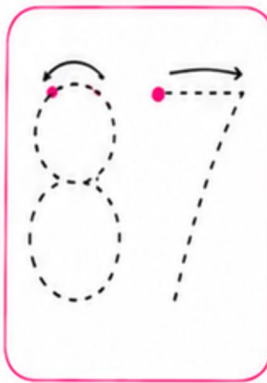
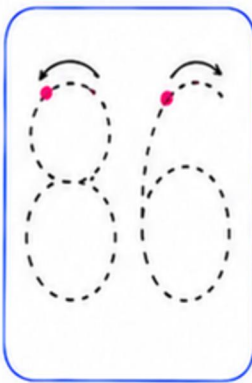
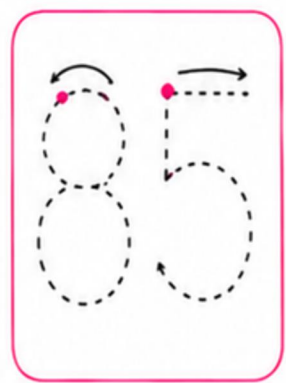
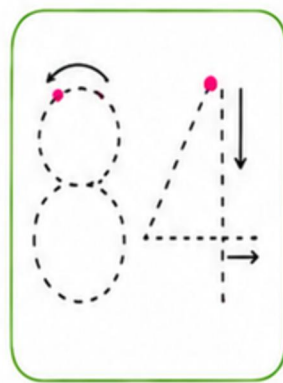
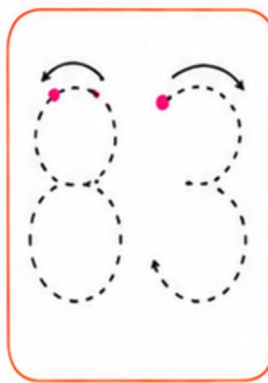
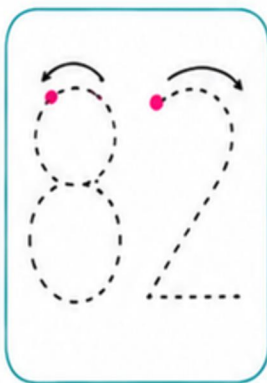
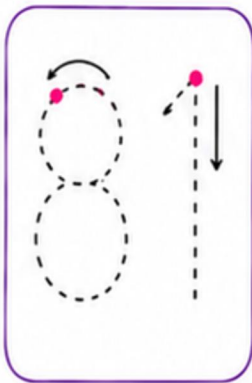




# REPASA LOS NÚMEROS



Repasa los números siguiendo las líneas punteadas.






# CANTIDADES



¿CUÁNTOS HAY?

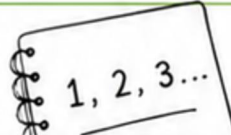


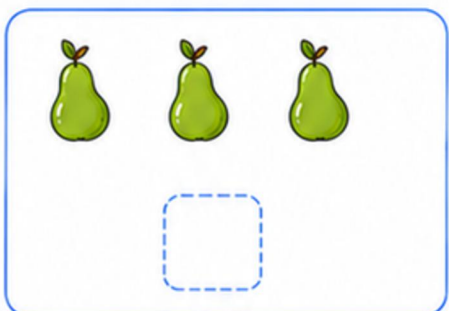

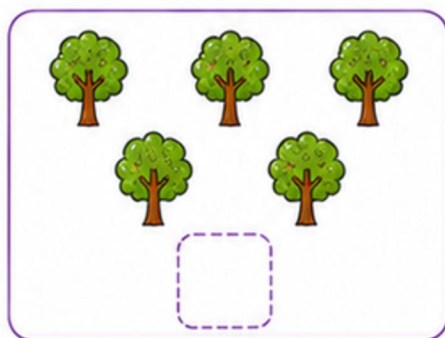
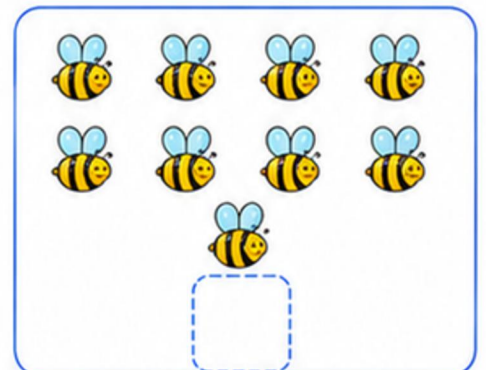

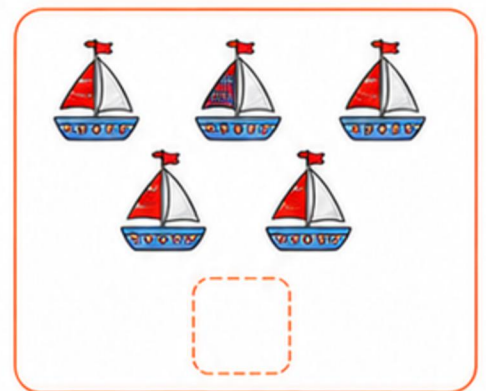

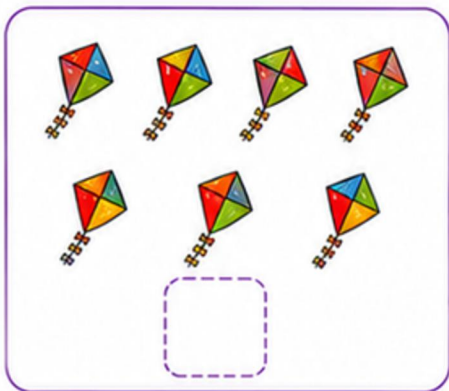
Cuenta los elementos de cada cuadro y escribe la **cantidad** en el recuadro.

# CANTIDADES


¿CUÁNTOS HAY?

Cuenta los elementos de cada cuadro y escribe la **cantidad** en el recuadro.



# RELACIONA CANTIDADES

Relaciona cada cantidad de objetos  
con su número correspondiente.



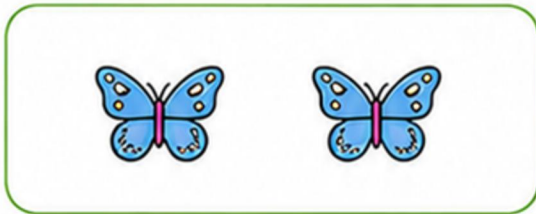
•

•




•

•




•

•




•


•



•

•






# RELACIONA CANTIDADES



Relaciona cada cantidad de objetos  
con su número correspondiente.



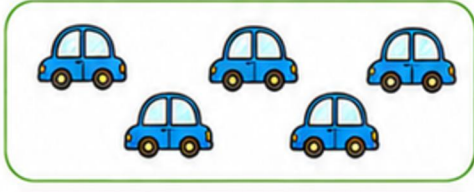
4



10



3




7



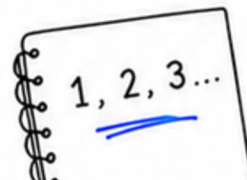
9



2



5



3

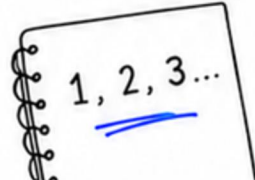




# ¿CUÁNTOS HAY?



Cuenta cuántos hay de cada dibujo y escribe el número correspondiente.






# ¿CUÁNTOS HAY?



Cuenta cuántos hay de cada dibujo y escribe el número correspondiente.




3





# ¿CÓMO SE HACE UNA SUMA?



La suma es juntar cantidades para saber el total.

1

## MIRA

Observa las cantidades que vas a sumar.



2

## JUNTA


Junta todas las cantidades.



3

## CUENTA

Cuenta cuántos elementos hay en total.



4

## ESCRIBE

Escribe el resultado de la suma.



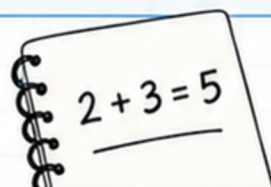
## EJEMPLO

$$4 + 3 = 7$$

4 manzanas

3 manzanas


7 manzanas en total






# SUMAS SIMPLES

Cuenta los elementos, suma y escribe el resultado.



+



=




+



=



+




=




+




=




+



=



+



=



+



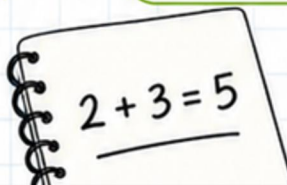
=



+



=







# SUMAS SIMPLES




Cuenta los elementos, suma y escribe el resultado.




+



=




+



=



+




=




+



=



+



=



+



=



+



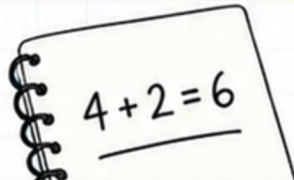
=



+




=






# SUMAS SIMPLES


Cuenta los elementos, suma y escribe el resultado.




+



=




+



=



+



=




+



=



+



=



+



=



+



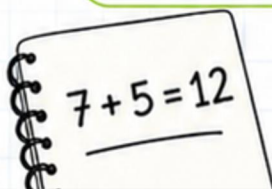
=




+



=





# SUMAS



Resuelve las siguientes sumas.



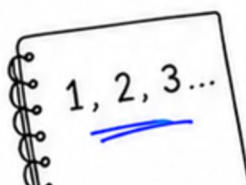
$$2 + 3 = \square$$


$$4 + 1 = \square$$

$$5 + 2 = \square$$

$$3 + 4 = \square$$

$$1 + 5 = \square$$





# SUMAS



Resuelve las siguientes sumas.



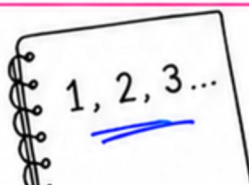
$$6 + 2 = \square$$

$$8 + 1 = \square$$

$$7 + 3 = \square$$


$$2 + 6 = \square$$

$$9 + 4 = \square$$





# ¿CÓMO SE HACE UNA RESTA?



La resta es quitar cantidades para saber cuánto queda.

1

## MIRA


Observa las cantidades que vas a restar.



2

## QUITA

Quita la cantidad que se indica.



3

## CUENTA

Cuenta cuántos elementos quedan.



4

## ESCRIBE

Escribe el resultado de la resta.

$$5 - 2 = 3$$

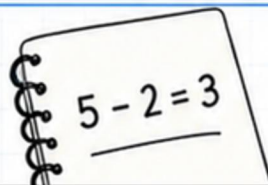
### EJEMPLO

$$5 - 2 = 3$$

5 manzanas en total

2 manzanas que se quitan


3 manzanas que quedan






# RESTAS SIMPLES

Cuenta los elementos, resta y escribe el resultado.



-




=




-



=



-



=



-



=



-



=



-



=



-



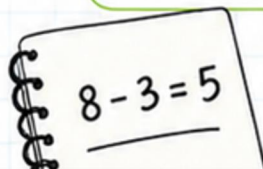
=



-




=






# RESTAS SIMPLES

Cuenta los elementos, resta y escribe el resultado.



-




=




-



=



-



=



-



=



-



=



-



=



-



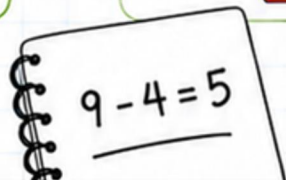
=



-




=






# RESTAS SIMPLES

Cuenta los elementos, resta y escribe el resultado.



-




=




-



=



-



=



-



=




-



=



-



=



-



=



-



=



8 - 3 = 5



# RESTAS

Resuelve las siguientes restas.

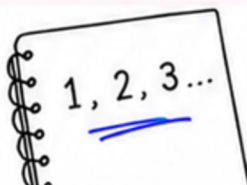
$$7 - 3 = \square$$


$$9 - 2 = \square$$

$$6 - 1 = \square$$

$$8 - 4 = \square$$

$$5 - 2 = \square$$





# RESTAS



Resuelve las siguientes restas.



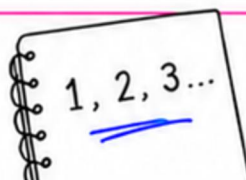
$$10 - 4 = \square$$

$$12 - 5 = \square$$

$$9 - 3 = \square$$

$$11 - 6 = \square$$

$$7 - 2 = \square$$



# ¿CÓMO SE HACE UNA SERIE?

Una serie es una secuencia de números que siguen un orden o una regla.

1

## MIRA

Observa los números que están dados.

1

2

3

5

2

## IDENTIFICA LA REGLA

Descubre cómo aumentan o disminuyen los números.

1 → 2 → 3 →  → 5  
+1 +1 +1 +1

3

## CONTINÚA LA SERIE

Aplica la regla para encontrar el número que falta.

1 2 3  5

4

## VERIFICA

Comprueba que la serie tiene sentido y sigue la misma regla.

1 → 2 → 3 → 4 → 5 ✓  
+1 +1 +1 +1

## EJEMPLO

2

3

4

6




La regla es:  
+1 (aumenta de uno en uno)




El número que falta es:  
5



La serie completa es:  
2, 3, 4, 5, 6





# SERIES DE NÚMEROS




Observa la serie y completa los números que faltan.



1

2

3



5



6

7



9

10



3

4

5



7



8

9



11

12



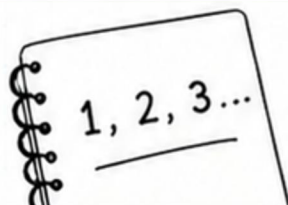
1



3

4

5




3






# SERIES



# DE NÚMEROS



Observa la serie y completa los números que faltan.


1

3

5


10
9

7


2

6

10


1

3

5



2

4



# SERIES DE NÚMEROS

→ HACIA ATRÁS ←

Observa la serie y completa los números que faltan contando hacia atrás.

1

## MIRA

Observa los números que están dados.

10

9

8

6

2

## IDENTIFICA LA REGLA

Descubre cómo disminuyen los números.

10 → 9 → 8 →  → 6  
-1      -1      -1      -1

3

## CONTINÚA LA SERIE

Aplica la regla para encontrar el número que falta.

10    9    8        6

4

## VERIFICA

Comprueba que la serie tiene sentido y sigue la misma regla.

10 → 9 → 8 → 7 → 6 ✓  
-1      -1      -1      -1

## EJEMPLO

7

6

5

3



La regla es:

-1 (disminuye de uno en uno)



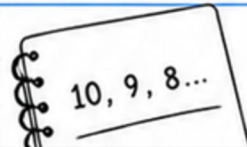
El número que falta es:

4



La serie completa es:

7, 6, 5, 4, 3



# SERIES DE NÚMEROS

← HACIA ATRÁS ←

Observa la serie y completa los números que faltan contando hacia atrás.



5

3

1



10

9

7



7

5

3



12

11

9



5

4

2



# ANTES Y DESPUÉS



Escribe el número que va antes (-1)  
y el número que va después (+1)  
de cada número dado.

$-1$        $+1$   
↖      ↗  
 7

$-1$        $+1$   
↖      ↗  
 12

$-1$        $+1$   
↖      ↗  
 3

$-1$        $+1$   
↖      ↗  
 18

$-1$        $+1$   
↖      ↗  
 1

$-1$        $+1$   
↖      ↗  
 9

$-1$        $+1$   
↖      ↗  
 14

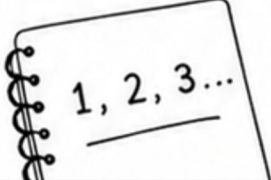
$-1$        $+1$   
↖      ↗  
 5

$-1$        $+1$   
↖      ↗  
 20

$-1$        $+1$   
↖      ↗  
 8


$-1$        $+1$   
↖      ↗  
 11

$-1$        $+1$   
↖      ↗  
 16





# ANTES Y DESPUÉS



Escribe el número que va **antes** (-1)  
y el número que va **después** (+1)  
de cada número dado.

-1      +1  
↖      ↗  
 15

-1      +1  
↖      ↗  
 8

-1      +1  
↖      ↗  
 22

-1      +1  
↖      ↗  
 4

-1      +1  
↖      ↗  
 17

-1      +1  
↖      ↗  
 10

-1      +1  
↖      ↗  
 13

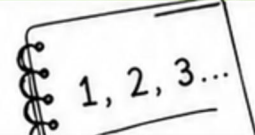
-1      +1  
↖      ↗  
 6

-1      +1  
↖      ↗  
 19

-1      +1  
↖      ↗  
 24


-1      +1  
↖      ↗  
 2

-1      +1  
↖      ↗  
 21





# ANTES Y DESPUÉS



Escribe el número que va antes (-1)  
y el número que va después (+1)  
de cada número dado.

$-1$        $+1$

↩      ↪

--	--	--

$-1$        $+1$

↩      ↪

--	--	--

$-1$        $+1$

↩      ↪

--	--	--

$-1$        $+1$

↩      ↪

--	--	--

$-1$        $+1$

↩      ↪

--	--	--

$-1$        $+1$

↩      ↪

--	--	--

$-1$        $+1$

↩      ↪

--	--	--

$-1$        $+1$

↩      ↪

--	--	--

$-1$        $+1$

↩      ↪

--	--	--

$-1$        $+1$

↩      ↪

--	--	--

$-1$        $+1$

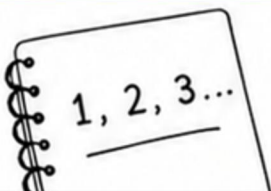
↩      ↪

--	--	--

$-1$        $+1$


↩      ↪

--	--	--



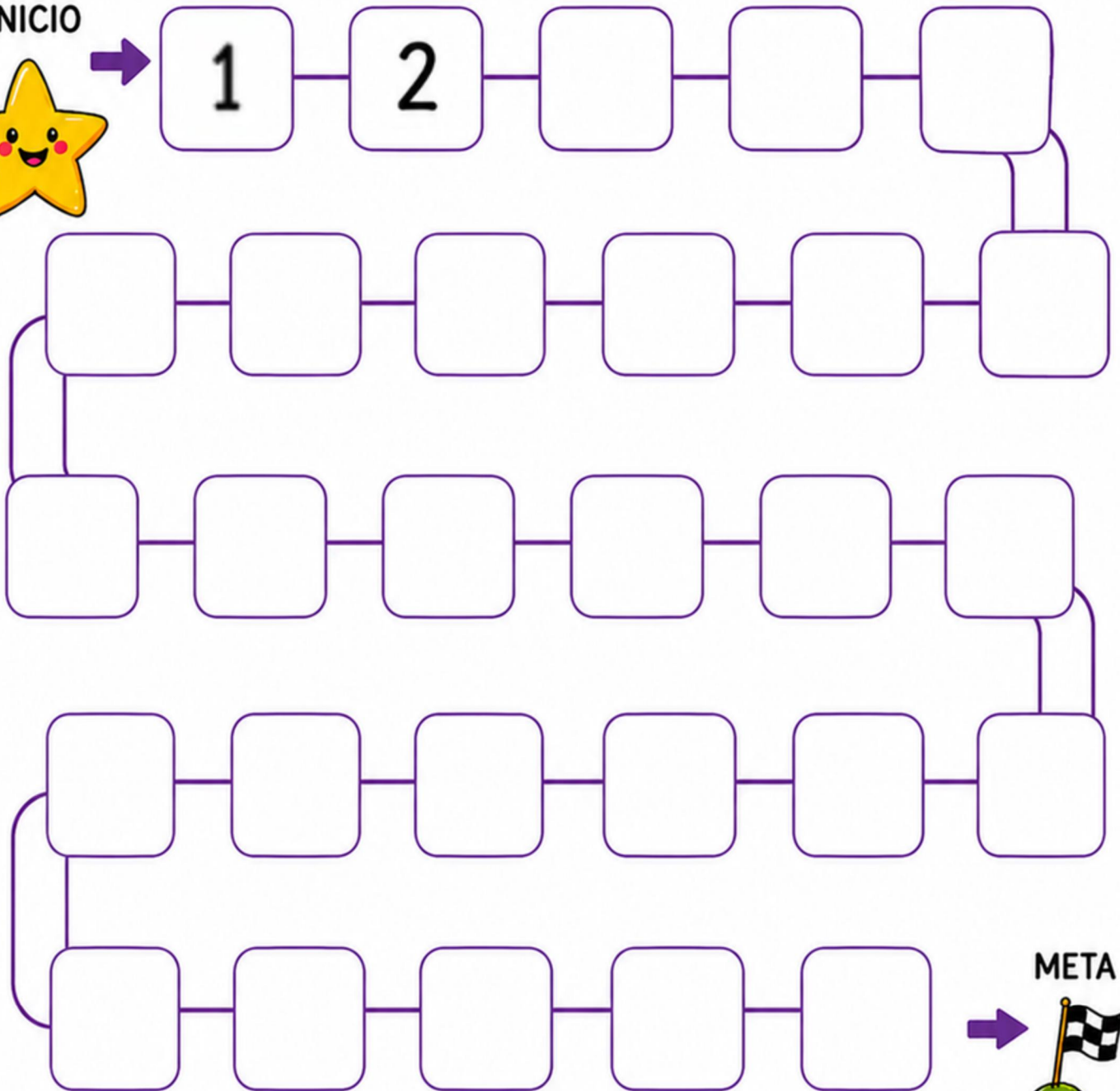


# LABERINTO NUMÉRICO




Escribe los números en orden desde el inicio hasta la meta.

INICIO



META





# CLASIFICA TAMAÑOS



Rodea los dibujos grandes de rojo,  
los medianos de azul y los pequeños de verde.

 GRANDE

 MEDIANO

 PEQUEÑO





# MÁS O MENOS



Cuenta los dibujos de cada grupo  
y rodea el que tiene **MÁS**.  
Tacha el que tiene **MENOS**.

	<p>MÁS &gt; MENOS &lt;</p>	
--	--	--

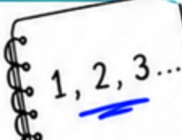
	<p>MÁS &gt; MENOS &lt;</p>	
--	--	--

	<p>MÁS &gt; MENOS &lt;</p>	
--	--	--

	<p>MÁS &gt; MENOS &lt;</p>	
--	--	--

	<p>MÁS &gt; MENOS &lt;</p>	
--	--	--

	<p>MÁS &gt; MENOS &lt;</p>	
--	--	--





# CLASIFICA TAMAÑOS



Rodea los dibujos grandes de rojo,  
los medianos de azul y los pequeños de verde.




GRANDE

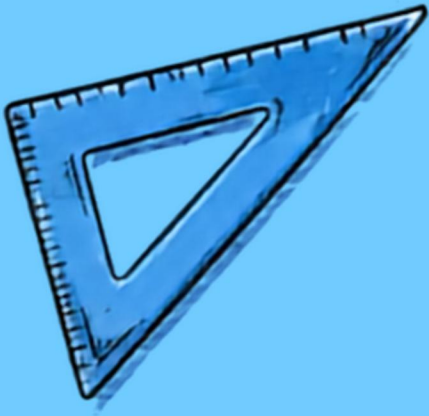


MEDIANO



PEQUEÑO





3